

**FINAL JEE-MAIN EXAMINATION – JULY, 2021**

**(Held On Tuesday 20<sup>th</sup> July, 2021)**

**TIME : 3 : 00 PM to 6 : 00 PM**

**PHYSICS**

**TEST PAPER WITH ANSWER**

**SECTION-A**

1. If the Kinetic energy of a moving body becomes four times its initial Kinetic energy, then the percentage change in its momentum will be :

- (1) 100%      (2) 200%  
(3) 300%      (4) 400%

80

**Official Ans. by NTA (1)**

2. A boy reaches the airport and finds that the escalator is not working. He walks up the stationary escalator in time  $t_1$ . If he remains stationary on a moving escalator then the escalator takes him up in time  $t_2$ . The time taken by him to walk up on the moving escalator will be :

- (1)  $\frac{t_1 t_2}{t_2 - t_1}$     (2)  $\frac{t_1 + t_2}{2}$     (3)  $\frac{t_1 t_2}{t_2 + t_1}$     (4)  $t_2 - t_1$

**Official Ans. by NTA (3)**

3. A satellite is launched into a circular orbit of radius  $R$  around earth, while a second satellite is launched into a circular orbit of radius  $1.02 R$ . The percentage difference in the time periods of the two satellites is :

- (1) 1.5                      (2) 2.0  
(3) 0.7                      (4) 3.0

**Official Ans. by NTA (4)**

4. With what speed should a galaxy move outward with respect to earth so that the sodium-D line at wavelength  $5890 \text{ \AA}$  is observed at  $5896 \text{ \AA}$  ?

- (1) 306 km/sec              (2) 322 km/sec  
(3) 296 km/sec              (4) 336 km/sec

**Official Ans. by NTA (1)**

5. The length of a metal wire is  $l_1$ , when the tension in it is  $T_1$  and is  $l_2$  when the tension is  $T_2$ . The natural length of the wire is :

- (1)  $\sqrt{l_1 l_2}$                       (2)  $\frac{l_1 T_2 - l_2 T_1}{T_2 - T_1}$   
(3)  $\frac{l_1 T_2 + l_2 T_1}{T_2 + T_1}$               (4)  $\frac{l_1 + l_2}{2}$

**Official Ans. by NTA (2)**

6. In an electromagnetic wave the electric field vector and magnetic field vector are given as  $\vec{E} = E_0 \hat{i}$  and  $\vec{B} = B_0 \hat{k}$  respectively. The direction of propagation of electromagnetic wave is along :

- (1)  $(\hat{k})$   
(2)  $\hat{j}$   
(3)  $(-\hat{k})$   
(4)  $(-\hat{j})$

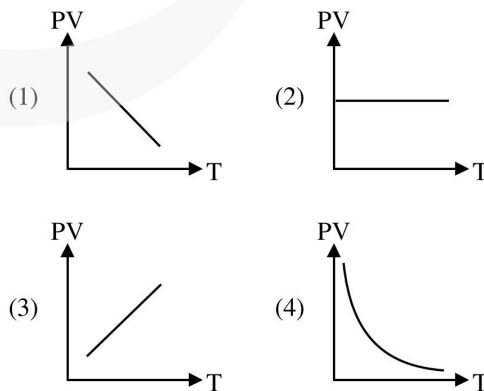
**Official Ans. by NTA (4)**

7. For a series LCR circuit with  $R = 100 \Omega$ ,  $L = 0.5 \text{ mH}$  and  $C = 0.1 \text{ pF}$  connected across  $220 \text{ V}-50 \text{ Hz}$  AC supply, the phase angle between current and supplied voltage and the nature of the circuit is :

- (1)  $0^\circ$ , resistive circuit  
(2)  $\approx 90^\circ$ , predominantly inductive circuit  
(3)  $0^\circ$ , resonance circuit  
(4)  $\approx 90^\circ$ , predominantly capacitive circuit

**Official Ans. by NTA (4)**

8. Which of the following graphs represent the behavior of an ideal gas ? Symbols have their usual meaning.



**Official Ans. by NTA (3)**

9. A particle is making simple harmonic motion along the X-axis. If at a distances  $x_1$  and  $x_2$  from the mean position the velocities of the particle are  $v_1$  and  $v_2$  respectively. The time period of its oscillation is given as :

$$(1) T = 2\pi \sqrt{\frac{x_2^2 + x_1^2}{v_1^2 - v_2^2}} \quad (2) T = 2\pi \sqrt{\frac{x_2^2 + x_1^2}{v_1^2 + v_2^2}}$$

$$(3) T = 2\pi \sqrt{\frac{x_2^2 - x_1^2}{v_1^2 + v_2^2}} \quad (4) T = 2\pi \sqrt{\frac{x_2^2 - x_1^2}{v_1^2 - v_2^2}}$$

**Official Ans. by NTA (4)**

10. An electron having de-Broglie wavelength  $\lambda$  is incident on a target in a X-ray tube. Cut-off wavelength of emitted X-ray is :

$$(1) 0 \quad (2) \frac{2m^2c^2\lambda^2}{h^2}$$

$$(3) \frac{2m\lambda^2}{h} \quad (4) \frac{hc}{mc}$$

**Official Ans. by NTA (3)**

11. A body rolls down an inclined plane without slipping. The kinetic energy of rotation is 50% of its translational kinetic energy. The body is :

- (1) Solid sphere
- (2) Solid cylinder
- (3) Hollow cylinder
- (4) Ring

**Official Ans. by NTA (2)**

12. If time ( $t$ ), velocity ( $v$ ), and angular momentum ( $l$ ) are taken as the fundamental units. Then the dimension of mass ( $m$ ) in terms of  $t$ ,  $v$  and  $l$  is :

- (1)  $[t^{-1} v^1 l^{-2}]$
- (2)  $[t^1 v^2 l^{-1}]$
- (3)  $[t^{-2} v^{-1} l^1]$
- (4)  $[t^{-1} v^{-2} l^1]$

**Official Ans. by NTA (4)**

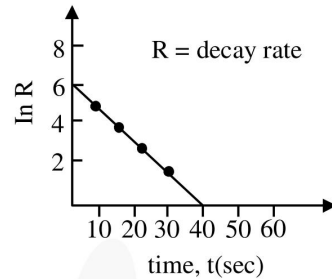
13. The correct relation between the degrees of freedom  $f$  and the ratio of specific heat  $\gamma$  is :

$$(1) f = \frac{2}{\gamma - 1} \quad (2) f = \frac{2}{\gamma + 1}$$

$$(3) f = \frac{\gamma + 1}{2} \quad (4) f = \frac{1}{\gamma + 1}$$

**Official Ans. by NTA (1)**

14. For a certain radioactive process the graph between  $\ln R$  and  $t$ (sec) is obtained as shown in the figure. Then the value of half life for the unknown radioactive material is approximately :



- (1) 9.15 sec
- (2) 6.93 sec
- (3) 2.62 sec
- (4) 4.62 sec

**Official Ans. by NTA (4)**

15. Consider a binary star system of star A and star B with masses  $m_A$  and  $m_B$  revolving in a circular orbit of radii  $r_A$  and  $r_B$ , respectively. If  $T_A$  and  $T_B$  are the time period of star A and star B, respectively, then :

- (1)  $\frac{T_A}{T_B} = \left(\frac{r_A}{r_B}\right)^{\frac{3}{2}}$
- (2)  $T_A = T_B$
- (3)  $T_A > T_B$  (if  $m_A > m_B$ )
- (4)  $T_A > T_B$  (if  $r_A > r_B$ )

**Official Ans. by NTA (2)**

16. At an angle of  $30^\circ$  to the magnetic meridian, the apparent dip is  $45^\circ$ . Find the true dip :

- (1)  $\tan^{-1}\sqrt{3}$
- (2)  $\tan^{-1}\frac{1}{\sqrt{3}}$
- (3)  $\tan^{-1}\frac{2}{\sqrt{3}}$
- (4)  $\tan^{-1}\frac{\sqrt{3}}{2}$

**Official Ans. by NTA (4)**

17. A body at rest is moved along a horizontal straight line by a machine delivering a constant power. The distance moved by the body in time ' $t$ ' is proportional to :

- (1)  $t^{\frac{3}{2}}$
- (2)  $t^{\frac{1}{2}}$
- (3)  $t^{\frac{1}{4}}$
- (4)  $t^{\frac{3}{4}}$

**Official Ans. by NTA (1)**

18. Two vectors  $\vec{P}$  and  $\vec{Q}$  have equal magnitudes. If the magnitude of  $\vec{P} + \vec{Q}$  is  $n$  times the magnitude of  $\vec{P} - \vec{Q}$ , then angle between  $\vec{P}$  and  $\vec{Q}$  is :

- (1)  $\sin^{-1}\left(\frac{n-1}{n+1}\right)$       (2)  $\cos^{-1}\left(\frac{n-1}{n+1}\right)$   
 (3)  $\sin^{-1}\left(\frac{n^2-1}{n^2+1}\right)$       (4)  $\cos^{-1}\left(\frac{n^2-1}{n^2+1}\right)$

**Official Ans. by NTA (4)**

19. Two small drops of mercury each of radius  $R$  coalesce to form a single large drop. The ratio of total surface energy before and after the change is :

- (1)  $2^{\frac{1}{3}}:1$       (2)  $1:2^{\frac{1}{3}}$       (3)  $2:1$       (4)  $1:2$

**Official Ans. by NTA (1)**

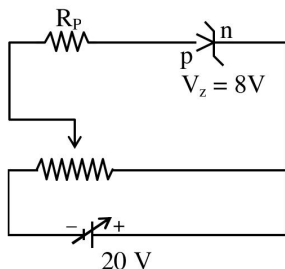
20. The magnetic susceptibility of a material of a rod is 499. Permeability in vacuum is  $4\pi \times 10^{-7}$  H/m. Absolute permeability of the material of the rod is :

- (1)  $4\pi \times 10^{-4}$  H/m  
 (2)  $2\pi \times 10^{-4}$  H/m  
 (3)  $3\pi \times 10^{-4}$  H/m  
 (4)  $\pi \times 10^{-4}$  H/m

**Official Ans. by NTA (2)**

**SECTION-B**

1. A zener diode having zener voltage 8 V and power dissipation rating of 0.5 W is connected across a potential divider arranged with maximum potential drop across zener diode is as shown in the diagram. The value of protective resistance  $R_p$  is ..... $\Omega$ .

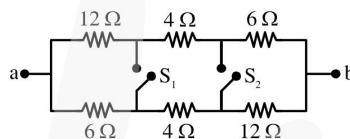


**Official Ans. by NTA (192 )**

2. A body of mass ' $m$ ' is launched up on a rough inclined plane making an angle of  $30^\circ$  with the horizontal. The coefficient of friction between the body and plane is  $\frac{\sqrt{x}}{5}$  if the time of ascent is half of the time of descent. The value of  $x$  is \_\_\_\_\_.

**Official Ans. by NTA (3)**

3. In the given figure switches  $S_1$  and  $S_2$  are in open condition. The resistance across  $ab$  when the switches  $S_1$  and  $S_2$  are closed is \_\_\_\_\_ $\Omega$ .

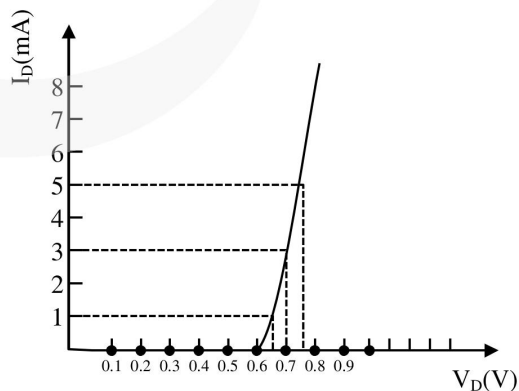


**Official Ans. by NTA (10)**

4. Two bodies, a ring and a solid cylinder of same material are rolling down without slipping an inclined plane. The radii of the bodies are same. The ratio of velocity of the centre of mass at the bottom of the inclined plane of the ring to that of the cylinder is  $\frac{\sqrt{x}}{2}$ . Then, the value of  $x$  is \_\_\_\_\_.

**Official Ans. by NTA (3)**

5. For the forward biased diode characteristics shown in the figure, the dynamic resistance at  $I_D = 3$  mA will be \_\_\_\_\_ $\Omega$ .



**Official Ans. by NTA (25)**

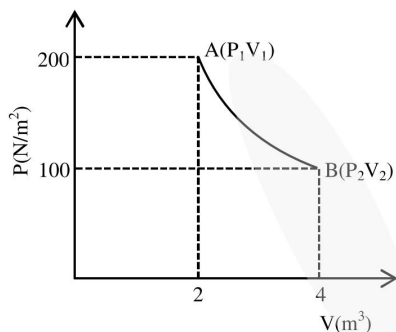
6. A series LCR circuit of  $R = 5\Omega$ ,  $L = 20 \text{ mH}$  and  $C = 0.5 \mu\text{F}$  is connected across an AC supply of  $250 \text{ V}$ , having variable frequency. The power dissipated at resonance condition is  $\_\_\_\_ \times 10^2 \text{ W}$ .

**Official Ans. by NTA (125)**

7. One mole of an ideal gas at  $27^\circ\text{C}$  is taken from A to B as shown in the given PV indicator diagram. The work done by the system will be  $\_\_\_\_ \times 10^{-1} \text{ J}$ .

[Given :  $R = 8.3 \text{ J / mole K}$ ,  $\ln 2 = 0.6931$ ]

(Round off to the nearest integer)



**Official Ans. by NTA (17258)**

8. A certain metallic surface is illuminated by monochromatic radiation of wavelength  $\lambda$ . The stopping potential for photoelectric current for this radiation is  $3V_0$ . If the same surface is illuminated with a radiation of wavelength  $2\lambda$ , the stopping potential is  $V_0$ . The threshold wavelength of this surface for photoelectric effect is  $\_\_\_\_ \lambda$ .

**Official Ans. by NTA (4)**

9. A body rotating with an angular speed of  $600 \text{ rpm}$  is uniformly accelerated to  $1800 \text{ rpm}$  in  $10 \text{ sec}$ . The number of rotations made in the process is  $\_\_\_\_$ .

**Official Ans. by NTA (200)**

10. A radioactive substance decays to  $\left(\frac{1}{16}\right)^{\text{th}}$  of its initial activity in  $80 \text{ days}$ . The half life of the radioactive substance expressed in days is  $\_\_\_\_$ .

**Official Ans. by NTA (20)**