

FINAL JEE-MAIN EXAMINATION – JUNE, 2022

(Held On Friday 24th June, 2022)

TIME : 9 : 00 AM to 12 : 00 PM

MATHEMATICS

TEST PAPER WITH SOLUTION

SECTION-A

1. Let $A = \{z \in \mathbb{C} : 1 \leq |z - (1 + i)| \leq 2\}$ and

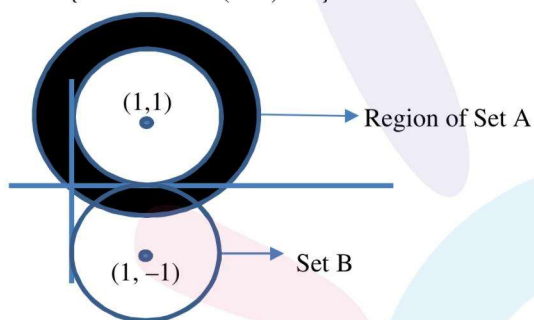
$B = \{z \in \mathbb{C} : |z - (1 - i)| = 1\}$. Then, B :

- (A) is an empty set
- (B) contains exactly two elements
- (C) contains exactly three elements
- (D) is an infinite set

Official Ans. by NTA (D)

Ans. (D)

Sol. $A = \{z \in \mathbb{C} : 1 \leq |z - (1 + i)| \leq 2\}$



$B = \{z \in \mathbb{C} : |z - (1 - i)| = 1\}$.

$A \cap B$ has infinite set.

2. The remainder when 3^{2022} is divided by 5 is

- (A) 1
- (B) 2
- (C) 3
- (D) 4

Official Ans. by NTA (D)

Ans. (D)

Sol. $3^{2022} = 9^{1011} = (10 - 1)^{1011} = 10m - 1 = 10m - 5 + 4$

$= 5(2m - 1) + 4$ (m is integer)

Remainder = 4

3. The surface area of a balloon of spherical shape being inflated, increases at a constant rate. If initially, the radius of balloon is 3 units and after 5 seconds, it becomes 7 units, then its radius after 9 seconds is :

- (A) 9
- (B) 10
- (C) 11
- (D) 12

Official Ans. by NTA (A)

Ans. (A)

Sol. Let r be the radius of spherical balloon

S = Surface area

$$S = 4\pi r^2$$

$$\frac{dS}{dt} = 8\pi r \times \frac{dr}{dt} = k \text{ (constant)}$$

$$4\pi r^2 = kt + C \text{ (C is constant of integration)}$$

$$\text{For } t = 0, r = 3 \Rightarrow 36\pi = C$$

$$\text{For } t = 5, r = 7 \Rightarrow K = 32\pi$$

$$4\pi r^2 = 32\pi t + 36\pi$$

$$r^2 = 8t + 9$$

$$\text{for } t = 9$$

$$r^2 = 81$$

$$r = 9$$

4. Bag A contains 2 white, 1 black and 3 red balls and bag B contains 3 black, 2 red and n white balls. One bag is chosen at random and 2 balls drawn from it at random, are found to be 1 red and 1 black. If the probability that both balls come

from Bag A is $\frac{6}{11}$, then n is equal to _____ .

- (A) 13
- (B) 6
- (C) 4
- (D) 3

Official Ans. by NTA (C)

Ans. (C)

Sol. E_1 = denotes selection for 1st bag

E_2 = denotes selection for 2nd bag

$$P(E_1) = \frac{1}{2}, P(E_2) = \frac{1}{2}$$

A = selected balls are 1 red & 1 black

$$P\left(\frac{A}{E_1}\right) = \frac{{}^3C_1 \times {}^1C_1}{{}^6C_2} = \frac{1}{5}$$

$$P\left(\frac{A}{E_2}\right) = \frac{{}^3C_1 \times {}^2C_1}{(n+5)C_2} = \frac{12}{(n+5)(n+4)}$$

$$P\left(\frac{E_1}{A}\right) = \frac{P(E_1) \times P\left(\frac{A}{E_1}\right)}{P(E_1) \times P\left(\frac{A}{E_1}\right) + P(E_2) \times P\left(\frac{A}{E_2}\right)}$$

$$= \frac{\frac{1}{10}}{\frac{1}{10} + \frac{6}{(n+5)(n+4)}} = \frac{6}{11}$$

$$\Rightarrow n = 4$$

5. Let $x^2 + y^2 + Ax + By + C = 0$ be a circle passing through $(0, 6)$ and touching the parabola $y = x^2$ at $(2, 4)$. Then $A + C$ is equal to _____ .
- (A) 16 (B) 88/5
(C) 72 (D) -8

Official Ans. by NTA (A)

Ans. (A)

Sol. $x^2 + y^2 + Ax + By + C = 0$ is passing through $(0, 6)$

$$\Rightarrow 6B + C = -36$$

The tangent of the parabola $y = x^2$ at $(2, 4)$ is

$$4x - y - 4 = 0 \quad \text{---(1)}$$

The tangent of circle $x^2 + y^2 + Ax + By + C = 0$ at $(2, 4)$ is

$$(4 + A)x + (8 + B)y + 2A + 4B + 2C = 0 \quad \text{---(2)}$$

From Equation (1) and (2)

$$\frac{4 + A}{4} = \frac{8 + B}{-1} = \frac{2A + 4B + 2C}{-4}$$

$$A + 4B = -36 \quad \text{---(3)}$$

$$3A + 4B + 2C = -4 \quad \text{---(4)}$$

From equation (3) and (4)

$$A + C = 16$$

6. The number of values of α for which the system of equations :

$$x + y + z = \alpha$$

$$\alpha x + 2\alpha y + 3z = -1$$

$$x + 3\alpha y + 5z = 4$$

is inconsistent, is

- (A) 0 (B) 1
(C) 2 (D) 3

Official Ans. by NTA (B)

Ans. (B)

Sol. $x + y + z = \alpha$

$$\alpha x + 2\alpha y + 3z = -1$$

$$x + 3\alpha y + 5z = 4$$

Has inconsistent solution

$$D = \begin{vmatrix} 1 & 1 & 1 \\ \alpha & 2\alpha & 3 \\ 1 & 3\alpha & 5 \end{vmatrix} = 0$$

$$\Rightarrow (\alpha - 1)^2 = 0$$

$$\alpha = 1$$

For $\alpha = 1$

$$D_1 = \begin{vmatrix} 1 & 1 & 1 \\ -1 & 2 & 3 \\ 4 & 3 & 5 \end{vmatrix}$$

$$= (10 - 9) - (-5 - 12) + (-3 - 8)$$

$$= 1 + 17 - 11 \neq 0$$

For $\alpha = 1$ the system of equation has Inconsistent solution

7. If the sum of the squares of the reciprocals of the roots α and β of the equation $3x^2 + \lambda x - 1 = 0$ is 15, then $6(\alpha^3 + \beta^3)^2$ is equal to :

- (A) 18 (B) 24
(C) 36 (D) 96

Official Ans. by NTA (B)

Ans. (B)

Sol. Here α, β roots of equation $3x^2 + \lambda x - 1 = 0$

$$\alpha + \beta = \frac{-\lambda}{3}, \quad \alpha\beta = \frac{-1}{3}$$

$$\frac{1}{\alpha^2} + \frac{1}{\beta^2} = \frac{(\alpha + \beta)^2 - 2\alpha\beta}{\alpha^2\beta^2} = 15$$

$$\lambda^2 = 9$$

$$\text{Now } 6(\alpha^3 + \beta^3)^2 = 6\left((\alpha + \beta)\left((\alpha + \beta)^2 - 3\alpha\beta\right)\right)^2$$

$$= 6\left(\frac{\lambda^2}{9}\right)\left\{\frac{\lambda^2}{9} + 1\right\}^2 = 24$$

8. The set of all values of k for which $(\tan^{-1} x)^3 + (\cot^{-1} x)^3 = k\pi^3, x \in \mathbb{R}$, is the interval :

- (A) $\left[\frac{1}{32}, \frac{7}{8}\right]$ (B) $\left(\frac{1}{24}, \frac{13}{16}\right)$
 (C) $\left[\frac{1}{48}, \frac{13}{16}\right]$ (D) $\left[\frac{1}{32}, \frac{9}{8}\right)$

Official Ans. by NTA (A)

Ans. (A)

Sol. Let $S = (\tan^{-1} x)^3 + (\cot^{-1} x)^3$
 $= (\tan^{-1} x + \cot^{-1} x) - 3 \tan^{-1} x \cdot \cot^{-1} x (\tan^{-1} x + \cot^{-1} x)$
 $= \frac{\pi^3}{8} - \frac{3\pi}{2} \tan^{-1} x \left(\frac{\pi}{2} - \tan^{-1} x\right)$
 $= \frac{3\pi}{2} \left(\tan^{-1} x - \frac{\pi}{4}\right)^2 + \frac{\pi^3}{32}$
 $\Rightarrow \frac{\pi^3}{32} \leq S < \frac{7}{8}\pi^3$
 $= \frac{\pi^3}{32} \leq K\pi^3 < \frac{7}{8}\pi^3$
 $\frac{1}{32} \leq K < \frac{7}{8}$

9. Let $S = \{\sqrt{n} : 1 \leq n \leq 50 \text{ and } n \text{ is odd}\}$

Let $a \in S$ and $A = \begin{bmatrix} 1 & 0 & a \\ -1 & 1 & 0 \\ -a & 0 & 1 \end{bmatrix}$

If $\sum_{a \in S} \det(\text{adj}A) = 100\lambda$, then λ is equal to

- (A) 218 (B) 221
 (C) 663 (D) 1717

Official Ans. by NTA (B)

Ans. (B)

Sol. $S = \{\sqrt{n} : 1 \leq n \leq 50 \text{ and } n \text{ is odd}\}$
 $= \{\sqrt{1}, \sqrt{3}, \sqrt{5}, \dots, \sqrt{49}\}$, 25 terms
 $|A| = 1 + a^2$
 $\sum_{a \in S} \det(\text{adj}A) = \sum_{a \in S} |A|^2 = \sum_{a \in S} (1 + a^2)^2$
 $= 22100 = 100\lambda$
 $\lambda = 221$

10. $f(x) = 4 \log_e(x-1) - 2x^2 + 4x + 5, x > 1$, which one of the following is NOT correct ?

- (A) f is increasing in (1, 2) and decreasing in (2, ∞)
 (B) $f(x) = -1$ has exactly two solutions
 (C) $f'(e) - f''(2) < 0$
 (D) $f(x) = 0$ has a root in the interval (e, e + 1)

Official Ans. by NTA (C)

Ans. (C)

Sol. $f(x) = 4 \log_e(x-1) - 2x^2 + 4x + 5, x > 1$

$f'(x) = \frac{4}{x-1} - 4(x-1)$

For $1 < x < 2 \Rightarrow f'(x) > 0$

For $x > 2 \Rightarrow f'(x) < 0$ (option 1 is correct)

$f(x) = -1$ has two solution (option 2 is correct)

$f(e) > 0$

$f(e+1) < 0$

$f(e) \cdot f(e+1) < 0$ (option 4 is correct)

$f'(e) - f''(2) = \frac{4}{e-1} - 4(e-1) + 8 > 0$

(option C is incorrect)

11. the tangent at the point (x_1, y_1) on the curve $y = x^3 + 3x^2 + 5$ passes through the origin, then (x_1, y_1) does NOT lie on the curve :

- (A) $x^2 + \frac{y^2}{81} = 2$ (B) $\frac{y^2}{9} - x^2 = 8$
 (C) $y = 4x^2 + 5$ (D) $\frac{x}{3} - y^2 = 2$

Official Ans. by NTA (D)

Ans. (D)

Sol. The tangent at (x_1, y_1) to the curve

$y = x^3 + 3x^2 + 5$

$y - y_1 = (3x_1^2 + 6x_1)(x - x_1)$ passing through origin

$-y_1 = (3x_1^3 + 6x_1^2)(-x_1)$

$y_1 = (3x_1^3 + 6x_1^2) \dots \dots \dots (1)$

And (x_1, y_1) lies on the curve

$y = x^3 + 3x^2 + 5$

$$y_1 = x_1^3 + 3x_1^2 + 5 \text{ ----(2)}$$

From equation (1) and (2)

$$2y_1 = 3x_1^2 + \frac{15}{2}$$

Hence the equation of curve $y = \frac{3}{2}x^2 + \frac{15}{2}$

This curve does not intersect $\frac{x}{3} - y^2 = 2$

12. The sum of absolute maximum and absolute minimum values of the function

$f(x) = |2x^2 + 3x - 2| + \sin x \cos x$ in the interval $[0, 1]$ is :

(A) $3 + \frac{\sin(1) \cos^2(\frac{1}{2})}{2}$ (B) $3 + \frac{1}{2}(1 + 2\cos(1)) \sin(1)$

(C) $5 + \frac{1}{2}(\sin(1) + \sin(2))$ (D) $2 + \sin(\frac{1}{2}) \cos(\frac{1}{2})$

Official Ans. by NTA (B)

Ans. (B)

Sol. $f(x) = |2x^2 + 3x - 2| + \sin x \cos x$
 $f(x) = |(2x - 1)(x + 2)| + \sin x \cos x$

$$f'(x) = \begin{cases} 4x + 3 + \frac{\cos 2x}{4}, & \frac{1}{2} < x < 1 \\ -(4x + 3) + \frac{\cos 2x}{4}, & 0 \leq x < \frac{1}{2} \end{cases}$$

For $0 \leq x < \frac{1}{2} \Rightarrow f'(x) < 0$

For $\frac{1}{2} < x \leq 1 \Rightarrow f'(x) > 0$

$f(x)$ local minima at $x = \frac{1}{2}$ and

local maxima at $x = 1$

$$f\left(\frac{1}{2}\right) + f(1) = 3 + \frac{1}{2}(1 + 2\cos 1) \sin 1$$

13. If $\{a_i\}_{i=1}^n$ where n is an even integer, is an arithmetic progression with common difference 1,

and $\sum_{i=1}^n a_i = 192, \sum_{i=1}^{n/2} a_{2i} = 120$, then n is equal to:

- (A) 48 (B) 96
 (C) 92 (D) 104

Official Ans. by NTA (B)

Ans. (B)

Sol. $\sum_{i=1}^n a_i = \frac{n}{2}\{2a_1 + (n+1)\} = 192$

$$\Rightarrow 2a_1 + (n-1) = \frac{384}{n} \text{ ----(1)}$$

$$\sum_{i=1}^{n/2} a_{2i} = \frac{n}{4}\left[2a_1 + 2 + \left(\frac{n}{2} - 1\right)2\right] = 120$$

$$2a_1 + n = \frac{480}{n} \text{ ----(2)}$$

From equation (2) and (1)

$$1 = \frac{480}{n} - \frac{384}{n}$$

$$n = 480 - 384 = 96$$

14. If $x = x(y)$ is the solution of the differential

equation $y \frac{dx}{dy} = 2x + y^3(y+1)e^y, x(1) = 0$; then $x(e)$

is equal to :

(A) $e^3(e^e - 1)$ (B) $e^e(e^3 - 1)$

(C) $e^2(e^e + 1)$ (D) $e^e(e^2 - 1)$

Official Ans. by NTA (A)

Ans. (A)

Sol. $y \frac{dx}{dy} = 2x + y^3(y+1)e^y, x(1) = 0$

$$\frac{dx}{dy} - \frac{2}{y}x = y^2(y+1)e^y$$

$$I.f = e^{\int -\frac{2}{y} dy} = \frac{1}{y^2}$$

$$x \cdot \frac{1}{y^2} = \int (y+1)e^y dy$$

$$\frac{x}{y^2} = (y+1)e^y - e^y + c = y \cdot e^y + c$$

$$x = y^3 e^y + cy^2$$

For $x = 0, y = 1 \Rightarrow c = -e$

$$x = y^3 e^y - e \cdot y^2$$

$$x(e) = e^3(e^e - 1)$$

15. Let $\lambda x - 2y = \mu$ be a tangent to the hyperbola

$$a^2x^2 - y^2 = b^2. \text{ Then } \left(\frac{\lambda}{a}\right)^2 - \left(\frac{\mu}{b}\right)^2 \text{ is equal to:}$$

- (A) -2 (B) -4
(C) 2 (D) 4

Official Ans. by NTA (D)

Ans. (D)

Sol. $\lambda x - 2y = \mu$ is a tangent to the curve

$$a^2x^2 - y^2 = b^2 \text{ then}$$

$$a^2x^2 - \left(\frac{\lambda x - \mu}{2}\right)^2 = b^2$$

$$(4a^2 - \lambda^2)x^2 + 2\lambda\mu x - \mu^2 - 4b^2 = 0$$

$$\text{Disc.} = 0$$

$$4\lambda^2\mu^2 + 4(4a^2 - \lambda^2)(\mu^2 + 4b^2) = 0$$

$$4\lambda^2b^2 - 4a^2\mu^2 = 16a^2b^2$$

$$\frac{\lambda^2}{a^2} - \frac{\mu^2}{b^2} = 4$$

16. Let \hat{a}, \hat{b} be unit vectors. If \vec{c} be a vector such that

the angle between \hat{a} and \vec{c} is $\frac{\pi}{12}$, and

$$\hat{b} = \vec{c} + 2(\vec{c} \times \hat{a}), \text{ then } |6\vec{c}|^2 \text{ is equal to}$$

- (A) $6(3 - \sqrt{3})$ (B) $3 + \sqrt{3}$
(C) $6(3 + \sqrt{3})$ (D) $6(\sqrt{3} + 1)$

Official Ans. by NTA (C)

Ans. (C)

Sol. $|\hat{b}|^2 = |\vec{c} + 2(\vec{c} \times \hat{a})|^2$

$$|\hat{b}|^2 = |\vec{c}|^2 + 4|\vec{c} \times \hat{a}|^2 + 4\vec{c} \cdot (\vec{c} \times \hat{a})$$

$$1 = |\vec{c}|^2 + 4|\vec{c}|^2 \sin^2 \frac{\pi}{12} + 0$$

$$1 = |\vec{c}|^2 + 4|\vec{c}|^2 \left(\frac{\sqrt{3}-1}{2\sqrt{2}}\right)^2$$

$$|\vec{c}|^2 = \frac{1}{3 - \sqrt{3}} = \frac{3 + \sqrt{3}}{6}$$

$$\text{So } 6^2 |\vec{c}|^2 = 6(3 + \sqrt{3})$$

17. If a random variable X follows the Binomial distribution B (33, p) such that $3P(X = 0) = P(X = 1)$,

then the value of $\frac{P(X = 15)}{P(X = 18)} - \frac{P(X = 16)}{P(X = 17)}$ is equal

to

- (A) 1320 (B) 1088
(C) $\frac{120}{1331}$ (D) $\frac{1088}{1089}$

Official Ans. by NTA (A)

Ans. (A)

Sol. $n = 33$, let probability of success is p and $q = 1 - p$

$$3p(x = 0) = p(x = 1)$$

$$3 \cdot {}^{33}C_0(q)^{33} = {}^{33}C_1pq^{32}$$

$$p = \frac{1}{12}, q = \frac{11}{12}, \frac{q}{p} = 11$$

$$\frac{p(x = 15)}{p(x = 18)} - \frac{p(x = 16)}{p(x = 17)}$$

$$\frac{{}^{33}C_{15}p^{15}q^{18}}{{}^{33}C_{18}p^{18}q^{15}} - \frac{{}^{33}C_{16}p^{16}q^{17}}{{}^{33}C_{17}p^{17}q^{16}} = \left(\frac{q}{p}\right)^3 - \left(\frac{q}{p}\right)$$

$$= (11)^3 - 11$$

$$= 1320$$

18. The domain of the function

$$f(x) = \frac{\cos^{-1}\left(\frac{x^2 - 5x + 6}{x^2 - 9}\right)}{\log_e(x^2 - 3x + 2)}$$
 is

(A) $(-\infty, 1) \cup (2, \infty)$

(B) $(2, \infty)$

(C) $\left[-\frac{1}{2}, 1\right) \cup (2, \infty)$

(D) $\left[-\frac{1}{2}, 1\right) \cup (2, \infty) - \left\{\frac{3 + \sqrt{5}}{2}, \frac{3 - \sqrt{5}}{2}\right\}$

Official Ans. by NTA (D)

Ans. (D)

Sol. $-1 \leq \frac{x^2 - 5x + 6}{x^2 - 9} \leq 1$

$$\frac{x^2 - 5x + 6}{x^2 - 9} - 1 \leq 0$$

$$\frac{1}{x+3} \geq 0$$

$$x \in (-3, \infty) \dots\dots(1)$$

$$\frac{x^2 - 5x + 6}{x^2 - 9} + 1 \geq 0$$

$$\frac{2x+1}{x+3} \geq 0$$

$$x \in (-\infty, -3) \cup \left[-\frac{1}{2}, \infty\right) \dots\dots(2)$$

after taking intersection

$$x \in \left[-\frac{1}{2}, \infty\right)$$

$$x^2 - 3x + 2 > 0$$

$$x \in (-\infty, 1) \cup (2, \infty)$$

$$x^2 - 3x + 2 \neq 1$$

$$x \neq \frac{3 \pm \sqrt{5}}{2}$$

after taking intersection of each solution

$$\left[-\frac{1}{2}, 1\right) \cup (2, \infty) - \left\{\frac{3+\sqrt{5}}{2}, \frac{3-\sqrt{5}}{2}\right\}$$

19. Let

$$S = \left\{ \theta \in [-\pi, \pi] - \left\{ \pm \frac{\pi}{2} \right\} : \sin \theta \tan \theta + \tan \theta = \sin 2\theta \right\}$$

If $T = \sum_{\theta \in S} \cos 2\theta$, then $T + n(S)$ is equal

(A) $7 + \sqrt{3}$ (B) 9

(C) $8 + \sqrt{3}$ (D) 10

Official Ans. by NTA (B)

Ans. (B)

Sol. $\sin \theta \tan \theta + \tan \theta = \sin 2\theta$

$$\tan \theta (\sin \theta + 1) = \frac{2 \tan \theta}{1 + \tan^2 \theta}$$

$$\tan \theta = 0 \Rightarrow \theta = -\pi, 0, \pi$$

$$(\sin \theta + 1) = 2 \cdot \cos^2 \theta = 2(1 + \sin \theta)(1 - \sin \theta)$$

$\sin \theta = -1$ which is not possible

$$\sin \theta = \frac{1}{2} \quad \theta = \frac{\pi}{6}, \frac{5\pi}{6}$$

$$n(S) = 5$$

$$T = \cos 0 + \cos 2\pi + \cos 2\pi + \cos \frac{\pi}{3} + \cos \frac{5\pi}{3}$$

$$T = 4$$

$$T + n(S) = 9$$

20. The number of choices of $\Delta \in \{\wedge, \vee, \Rightarrow, \Leftrightarrow\}$, such that $(p\Delta q) \Rightarrow ((p\Delta \sim q) \vee ((\sim p)\Delta q))$ is a tautology, is

(A) 1 (B) 2

(C) 3 (D) 4

Official Ans. by NTA (B)

Ans. (B)

Sol. For tautology $((p\Delta \sim q) \vee ((\sim p)\Delta q))$ must be true.

This is possible only when $\Delta = \vee \& \Rightarrow$

SECTION-B

1. The number of one-one function $f : \{a, b, c, d\} \rightarrow \{0, 1, 2, \dots, 10\}$ such that $2f(a) - f(b) + 3f(c) + f(d) = 0$ is _____.

Official Ans. by NTA (31)

Ans. (31)

Sol. $2f(a) + 3f(c) = f(d) - f(b)$

Using fundamental principle of counting

Number of one-one function is 31

2. In an examination, there are 5 multiple choice questions with 3 choices, out of which exactly one is correct. There are 3 marks for each correct answer, -2 marks for each wrong answer and 0 mark if the question is not attempted. Then, the number of ways a student appearing in the examination gets 5 marks is _____.

Official Ans. by NTA (40)

Ans. (40)

Sol. $x_1 + x_2 + x_3 + x_4 + x_5 = 5$

Only one possibilities 3, 3, 3, -2, -2

$$\text{Number of ways is} = \frac{5!}{3!2!} \times 2 \times 2 = 40$$

3. Let $A\left(\frac{3}{\sqrt{a}}, \sqrt{a}\right)$, $a > 0$, be a fixed point in the xy-plane. The image of A in y-axis be B and the image of B in x-axis be C. If D(3 cos θ, a sin θ) is a point in the fourth quadrant such that the maximum area of ΔACD is 12 square units, then a is equal to _____.

Official Ans. by NTA (8)

Ans. (8)

Sol. $A = \left(\frac{3}{\sqrt{a}}, \sqrt{a} \right)$

$B = \left(\frac{-3}{\sqrt{a}}, \sqrt{a} \right)$

$C = \left(-\frac{3}{\sqrt{a}}, -\sqrt{a} \right)$

Area of ACD

$$\frac{1}{2} \begin{vmatrix} \frac{3}{\sqrt{a}} & \sqrt{a} \\ -\frac{3}{\sqrt{a}} & -\sqrt{a} \\ 3\cos\theta & a\sin\theta \end{vmatrix}$$

$\frac{1}{2} 6\sqrt{a}(\cos\theta - \sin\theta)$

$3\sqrt{a}(\cos\theta - \sin\theta)$

max values of function is $3\sqrt{a}\sqrt{2}$

$3\sqrt{a}\sqrt{2} = 12$

$2a = 16$

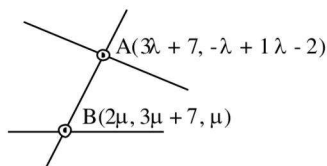
$a = 8$

4. Let a line having direction ratios 1, -4, 2 intersect the lines $\frac{x-7}{3} = \frac{y-1}{-1} = \frac{z+2}{1}$ and $\frac{x}{2} = \frac{y-7}{3} = \frac{z}{1}$ at the point A and B. Then $(AB)^2$ is equal to ____.

Official Ans. by NTA (84)

Ans. (84)

Sol.



DR's of AB

$(3\lambda - 2\mu + 7, -\lambda - 3\mu - 6, \lambda - \mu - 2)$

$\frac{3\lambda - 2\mu + 7}{1} = \frac{-\lambda - 3\mu - 6}{-4} = \frac{\lambda - \mu - 2}{2}$

Taking first (2) $-12\lambda + 8\mu - 28 = -\lambda - 3\mu - 6$

$\lambda - \mu + 2 = 0$

Taking second & third

$-2\lambda - 6\mu - 12 = -4\lambda + 4\mu + 8$

$\lambda - 5\mu - 10 = 0$

After solving above two equation $\lambda = -5, \mu = -3$

$A = (-8, 6, 7)$

$B = (-6, -2, -3)$

$(AB)^2 = 4 + 64 + 16 = 84$

5. The number of points where the function

$$f(x) = \begin{cases} |2x^2 - 3x - 7| & \text{if } x \leq -1 \\ [4x^2 - 1] & \text{if } -1 < x < 1 \\ |x+1| + |x-2| & \text{if } x \geq 1 \end{cases}$$

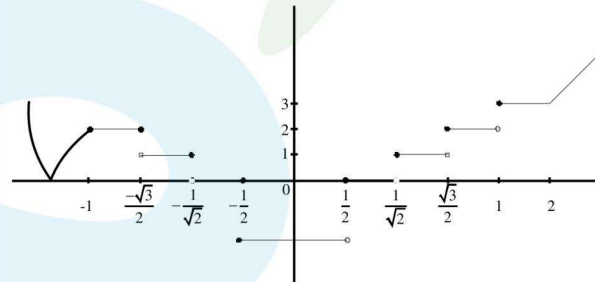
$[t]$ denotes the greatest integer $\leq t$, is

discontinuous is _____.

Official Ans. by NTA (7)

Ans. (7)

Sol.



6. Let $f(\theta) = \sin\theta + \int_{-\pi/2}^{\pi/2} (\sin\theta + t \cos\theta) f(t) dt$. Then the

value of $\left| \int_0^{\pi/2} f(\theta) d\theta \right|$ is _____.

Official Ans. by NTA (1)

Ans. (1)

Sol. $f(\theta) = \sin\theta + \int_{-\pi/2}^{\pi/2} (\sin\theta + t \cos\theta) f(t) dt$

$f(\theta) = \sin\theta + \sin\theta \int_{-\pi/2}^{\pi/2} f(t) dt + \cos\theta \int_{-\pi/2}^{\pi/2} tf(t) dt$

Let $A = \int_{-\pi/2}^{\pi/2} f(t) dt$, $B = \int_{-\pi/2}^{\pi/2} tf(t) dt$

$$f(\theta) = \sin \theta + A \sin \theta + B \cos \theta$$

$$f(\theta) = (A + 1) \sin \theta + B \cos \theta$$

$$A = \int_{-\pi/2}^{\pi/2} (A + 1) \sin t + B \cos t \, dt$$

$$A = 2B \quad \dots\dots(1)$$

$$B = \int_{-\pi/2}^{\pi/2} t((A + 1) \sin t + B \cos t) \, dt$$

$$B = \int_{-\pi/2}^{\pi/2} t(A + 1) \sin t \, dt$$

$$B = (A + 1) 2 \int_0^{\pi/2} t \sin t \, dt$$

$$B = (A + 1) 2.1$$

$$2A + 2 - B = 0 \quad \dots\dots(2)$$

After solving

$$B = -\frac{2}{3}, A = -\frac{4}{3}$$

$$\left| \int_0^{\pi/2} f(\theta) d\theta \right| = \left| \int_0^{\pi/2} -\frac{1}{3} \sin \theta - \frac{2}{3} \cos \theta \right|$$

$$= 1$$

7. Let $\text{Max}_{0 \leq x \leq 2} \left\{ \frac{9-x^2}{5-x} \right\} = \alpha$ and $\text{Min}_{0 \leq x \leq 2} \left\{ \frac{9-x^2}{5-x} \right\} = \beta$

If $\int_{\beta-\frac{8}{3}}^{2\alpha-1} \text{Max} \left\{ \frac{9-x^2}{5-x}, x \right\} dx = \alpha_1 + \alpha_2 \log_e \left(\frac{8}{15} \right)$ then

$\alpha_1 + \alpha_2$ is equal to _____

Official Ans. by NTA (34)

Ans. (34)

Sol. $y = \frac{9-x^2}{5-x} = 5 + x + \frac{16}{x-5}$

$$\frac{dy}{dx} = 1 - \frac{16}{(x-5)^2}$$

So critical point is $x = 1$ in $[0, 2]$

$$y(0) = \frac{9}{5}, y(1) = 2, y(2) = \frac{5}{3}$$

So $\alpha = 2$ and $\beta = \frac{5}{3}$

$$I = \int_{-1}^3 \text{max} \left(\frac{9-x^2}{5-x}, x \right)$$

$$I = \int_{-1}^{9/5} \frac{9-x^2}{5-x} dx + \int_{9/5}^3 x dx$$

$$I = \int_{-1}^{9/5} 5 + x + \frac{16}{x-5} dx + \int_{9/5}^3 x dx$$

After solving

$$I = 14 + \frac{28}{25} + 16 \ln \left(\frac{8}{15} \right) + \frac{72}{25}$$

$$\alpha_1 = 18 \text{ and } \alpha_2 = 16$$

8. If two tangents drawn from a point (α, β) lying on the ellipse $25x^2 + 4y^2 = 1$ to the parabola $y^2 = 4x$ are such that the slope of one tangent is four times the other, then the value of $(10\alpha + 5)^2 + (16\beta^2 + 50)^2$ equals _____

Official Ans. by NTA (2929)

Ans. (2929)

Sol. $\alpha = \frac{1}{5} \cos \theta, \beta = \frac{1}{2} \sin \theta$

Equation of tangent to $y^2 = 4x$

$$y = mx + \frac{1}{m}$$

It passes through (α, β)

$$\frac{1}{2} \sin \theta = m \frac{1}{5} \cos \theta + \frac{1}{m}$$

$$m^2 \left(\frac{\cos \theta}{5} \right) - m \left(\frac{1}{2} \sin \theta \right) + 1 = 0$$

It has two roots m_1 and m_2 where $m_1 = 4m_2$

$$m_1 + m_2 = \frac{\frac{1}{2} \sin \theta}{\frac{\cos \theta}{5}}$$

$$m_1 m_2 = -\frac{5}{\cos \theta}$$

After eliminating m_1 and m_2

$$\cos \theta = \frac{-5 \pm \sqrt{29}}{2}$$

$$\alpha = \frac{-5 \pm \sqrt{29}}{10} \Rightarrow 10\alpha + 5 = \pm \sqrt{29}$$

$$\beta^2 = \frac{1}{4} \sin^2 \theta \Rightarrow 16\beta^2 = -50 \pm 10\sqrt{29}$$

$$(10\alpha + 5)^2 + (16\beta^2 + 50)^2 = 2929$$

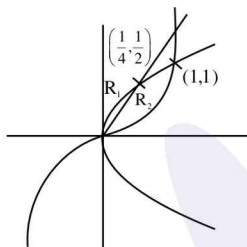
9. Let S be the region bounded by the curves $y = x^3$ and $y^2 = x$. The curve $y = 2|x|$ divides S into two regions of areas R_1 and R_2 .

If $\max\{R_1, R_2\} = R_2$, then $\frac{R_2}{R_1}$ is equal to ____ .

Official Ans. by NTA (19)

Ans. (19)

Sol.



$$S = \int_0^1 \sqrt{x} - x^3$$

$$= \left[\frac{2x^{3/2}}{3} - \frac{x^4}{4} \right]_0^1$$

$$= \frac{5}{12}$$

$$R_1 = \int_0^{1/4} (\sqrt{x} - 2x) dx$$

$$= \left[\frac{2x^{3/2}}{3} - x^2 \right]_0^{1/4} = \frac{1}{48}$$

$$\therefore R_2 = \frac{19}{48}$$

$$\text{So, } \frac{R_2}{R_1} = 19$$

10. If the shortest distance between the line

$$\vec{r} = (-\hat{i} + 3\hat{k}) + \lambda(\hat{i} - a\hat{j}) \text{ and}$$

$$\vec{r} = (-\hat{j} + 2\hat{k}) + \mu(\hat{i} - \hat{j} + \hat{k}) \text{ is } \sqrt{\frac{2}{3}}, \text{ then the integral}$$

value of a is equal to

Official Ans. by NTA (2)

Ans. (2)

Sol. $a_1 = (-1, 0, 3)$

$$a_2 = (0, -1, 2)$$

$$b_1 = (1, -a, 0) \text{ dr's of line (1)}$$

$$b_2 = (1, -1, 1) \text{ dr's of line (2)}$$

$$\bar{a}_2 - \bar{a}_1 = (1, -1, -1)$$

$$\bar{b}_1 \times \bar{b}_2 = \begin{vmatrix} \hat{i} & \hat{j} & \hat{k} \\ 1 & -a & 0 \\ 1 & -1 & 1 \end{vmatrix}$$

$$\bar{b}_1 \times \bar{b}_2 = \hat{i}(-a) - \hat{j}(a-1) + \hat{k}(a-1)$$

$$|\bar{b}_1 \times \bar{b}_2| = \sqrt{a^2 + 1 + (a-1)^2}$$

$$a_2 - a_1 \cdot \bar{b}_1 \times \bar{b}_2 = 2 - 2a$$

$$\frac{2(1-a)}{\sqrt{a^2 + 1 + (a-1)^2}} = \sqrt{\frac{2}{3}}$$

Squaring on both the side

$$\text{After solving } a = 2, \frac{1}{2}$$