



FINAL JEE-MAIN EXAMINATION - JULY, 2022

Held On Wednesday 27 July, 2022

TIME :9:00 AM to 12:00 NOON

SECTION-A

1. A torque meter is calibrated to reference standards of mass, length and time each with 5% accuracy. After calibration, the measured torque with this torque meter will have net accuracy of :  
 (A) 15% (B) 25% (C) 75% (D) 5%

Official Ans. by NTA (B)

Ans. (B)

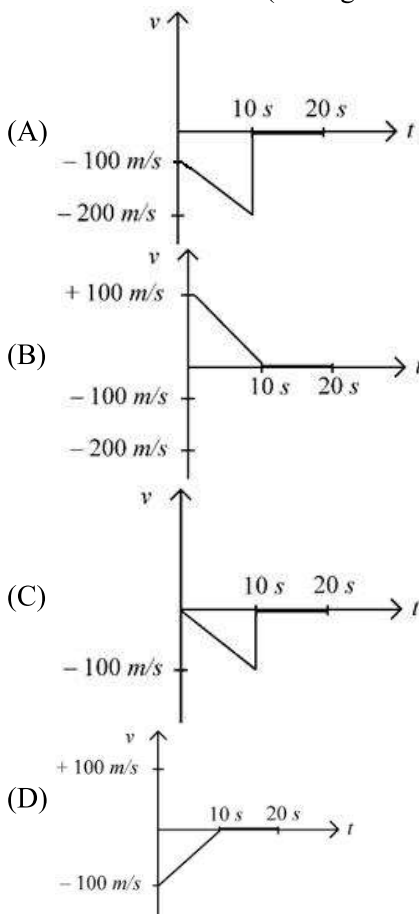
- Sol. Dimensional formula for Torque  
 $[\tau] = [ML^2T^{-2}]$

Now

Percentage error in torque = %  $\tau$  = % M + 2 % L + 2 % T

%  $\tau$  = 25%

2. A bullet is shot vertically downwards with an initial velocity of 100 m/s from a certain height. Within 10 s, the bullet reaches the ground and instantaneously comes to rest due to the perfectly inelastic collision. The velocity-time curve for total time  $t = 20$  s will be : (Take  $g = 10 \text{ m/s}^2$ )



Official Ans. by NTA (A)

Ans. (A)

- Sol.  $V = -100 - 10t$

3. Sand is being dropped from a stationary dropper at a rate of  $0.5 \text{ kgs}^{-1}$  on a conveyor belt moving with a velocity of  $5 \text{ ms}^{-1}$ . The power needed to keep belt moving with the same velocity will be :

- (A) 1.25 W (B) 2.5 W  
 (C) 6.25 W (D) 12.5 W

Official Ans. by NTA (D)

Ans. (D)

- Sol. Thrust =  $\lambda V_{\text{rel}}$   
 $= 2.5 \text{ N}$

Now, Power =  $F \times V = 12.5 \text{ W}$

4. A bag is gently dropped on a conveyor belt moving at a speed of 2 m/s. The coefficient of friction between the conveyor belt and bag is 0.4 Initially, the bag slips on the belt before it stops due to friction. The distance travelled by the bag on the belt during slipping motion is : [Take  $g = 10 \text{ m/s}^2$ ]

- (A) 2 m (B) 0.5 m  
 (C) 3.2 m (D) 0.8 m

Official Ans. by NTA (B)

Ans. (B)

- Sol. In frame of belt

$a = \mu g = 4 \text{ m/s}^2$ ,  $v = 2 \text{ m/s}$ ,  $u = 0$

$$v^2 = u^2 + 2as$$

$$\Rightarrow s = 0.5 \text{ m}$$

5. Two cylindrical vessels of equal cross-sectional area  $16 \text{ cm}^2$  contain water upto heights 100 cm and 150 cm respectively. The vessels are interconnected so that the water levels in them become equal. The work done by the force of gravity during the process, is [Take density of water =  $10^3 \text{ kg/m}^3$  and  $g = 10 \text{ ms}^{-2}$ ]

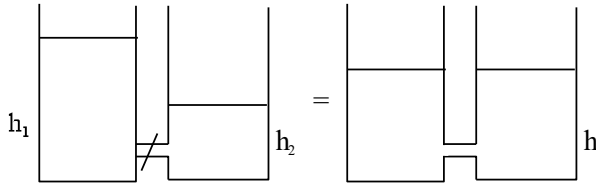
- (A) 0.25 J (B) 1 J  
 (C) 8 J (D) 12 J

Official Ans. by NTA (B)

Ans. (B)



Sol.



$$h = \frac{h_1 + h_2}{2}$$

Now,

$$W = U_f - U_r$$

$$W = (\rho A h_1) g \frac{h_1}{2} + (\rho A h_2) g \frac{h_2}{2} - \rho A (h_1 + h_2) g$$

$$\left( \frac{h_1 + h_2}{4} \right)$$

$$W = \frac{\rho A g}{2} \left[ h_1^2 + h_2^2 - \frac{(h_1 + h_2)^2}{2} \right]$$

$$W = 1 \text{ J}$$

6. Two satellites A and B having masses in the ratio 4:3 are revolving in circular orbits of radii 3r and 4 r respectively around the earth. The ratio of total mechanical energy of A to B is :

- (A) 9 : 16                      (B) 16 : 9  
(C) 1 : 1                        (D) 4 : 3

**Official Ans. by NTA (B)**

**Ans. (B)**

Sol. Given that  $\frac{m_1}{m_2} = \frac{4}{3}$ ,  $\frac{r_1}{r_2} = \frac{3}{4}$

$$\text{Now TE} = \frac{1}{2} m v^2 + \left( \frac{-GMm}{r} \right)$$

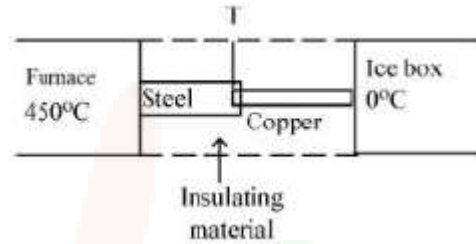
$$\text{but } \frac{m v^2}{r} = \frac{GMm}{r^2} \Rightarrow m v^2 = \frac{GMm}{r}$$

$$\Rightarrow \text{TE} = - \frac{GMm}{2r} \propto \frac{m}{r}$$

$$\frac{\text{TE}_1}{\text{TE}_2} = \frac{m_1}{m_2} \cdot \frac{r_2}{r_1} = \frac{4}{3} \times \frac{4}{3} = \frac{16}{9}$$

7. If  $K_1$  and  $K_2$  are the thermal conductivities  $L_1$  and  $L_2$  are the lengths and  $A_1$  and  $A_2$  are the cross sectional areas of steel and copper rods respectively such that  $\frac{K_2}{K_1} = 9, \frac{A_1}{A_2} = 2, \frac{L_1}{L_2} = 2$ .

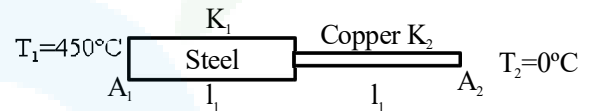
Then, for the arrangement as shown in the figure. The value of temperature  $T$  of the steel – copper junction in the steady state will be :



- (A) 18°C                      (B) 14 °C  
(C) 45 °C                     (D) 150 °C

**Official Ans. by NTA (C)**

**Ans. (C)**



Sol.

$$\frac{d\theta}{dt} = \frac{K_1 A_1}{l_1} (T_1 - T) = \frac{K_2 A_2}{l_2} (T - T_2)$$

$$\Rightarrow \frac{450 - T}{T - 0} = \frac{K_2 A_2 l_1}{K_1 A_1 l_2} = 9 \times \frac{1}{2} \times 2$$

$$\Rightarrow 450 - T = 9T \Rightarrow T = 45^\circ\text{C}$$

8. Read the following statements :

- A. When small temperature difference between a liquid and its surrounding is doubled the rate of loss of heat of the liquid becomes twice.
- B. Two bodies P and Q having equal surface areas are maintained at temperature 10°C and 20 °C. The thermal radiation emitted in a given time by P and Q are in the ratio 1 : 1.15
- C. A carnot Engine working between 100 K and 400 K has an efficiency of 75%
- D. When small temperature difference between a liquid and its surrounding is quadrupled, the rate of loss of heat of the liquid becomes twice.

Choose the correct answer from the options given below :

- (A) A, B, C only                      (B) A, B only  
(C) A, C only                        (D) B, C, D only

**Official Ans. by NTA (A)**

**Ans. (A)**



**Sol. Heat Transfer**

- A. by Newton's law of cooling  $\frac{d\theta}{dt} \propto \Delta T$
- B.  $H = \frac{d\theta}{dt} = \sigma eAT^4 \Rightarrow \frac{H_p}{H_q} = \left(\frac{T_p}{T_q}\right)^4 = \left(\frac{283}{293}\right)^4$   
 $H_p : H_q = 1 : (1.03)^4 = 1 : (1.03)^4 = 1 : 1.15$   
 $\Rightarrow$  B is correct
- C.  $\eta = 1 - \frac{100}{400} = \frac{3}{4} = 75\%$
- D. is wrong as  $\frac{d\theta}{dt} \propto \Delta T$

9. Same gas is filled in two vessels of the same volume at the same temperature. If the ratio of the number of molecules is 1:4, then
- A. The r.m.s. velocity of gas molecules in two vessels will be the same.
- B. The ratio of pressure in these vessels will be 1 : 4
- C. The ratio of pressure will be 1 : 1
- D. The r.m.s. velocity of gas molecules in two vessels will be in the ratio of 1 : 4
- (A) A and C only                      (B) B and D only  
 (C) A and B only                      (D) C and D only

**Official Ans. by NTA (C)**

**Ans. (C)**

**Sol. KTG**

A.  $V_{Rms} = \sqrt{\frac{3RT}{M_w}} \Rightarrow V_{Rms}$  is same

B.  $\frac{P_1}{P_2} = \frac{N_1}{N_2} \Rightarrow$  B is correct

Ans [A & B only are correct]

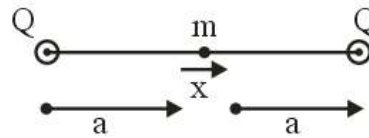
10. Two identical positive charges Q each are fixed at a distance of '2a' apart from each other. Another point charge q<sub>0</sub> with mass 'm' is placed at midpoint between two fixed charges. For a small displacement along the line joining the fixed charges, the charge q<sub>0</sub> executes SHM. The time period of oscillation of charge q<sub>0</sub> will be :

- (A)  $\sqrt{\frac{4\pi^3 \epsilon_0 m a^3}{q_0 Q}}$                       (B)  $\sqrt{\frac{q_0 Q}{4\pi^3 \epsilon_0 m a^3}}$
- (C)  $\sqrt{\frac{2\pi^2 \epsilon_0 m a^3}{q_0 Q}}$                       (D)  $\sqrt{\frac{8\pi^3 \epsilon_0 m a^3}{q_0 Q}}$

**Official Ans. by NTA (A)**

**Ans. (A)**

**Sol. Electrostatics**



$$F = m acc^n = \frac{KQq_0}{(a-x)^2} - \frac{KQq_0}{(a+x)^2}$$

$$m acc^n = \frac{KQq_0[2a][2x]}{(a^2 - x^2)^2}$$

$$\Rightarrow acc^n \approx \left(\frac{4kQq_0}{ma^3}\right)x$$

$$T = 2\pi \sqrt{\frac{\pi\epsilon_0 m a^3}{Qq_0}}$$

$$T = \sqrt{\frac{4\pi^3 \epsilon_0 m a^3}{Qq_0}}$$

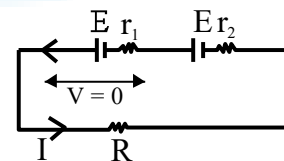
11. Two sources of equal emfs are connected in series. This combination is connected to an external resistance R. The internal resistances of the two sources are r<sub>1</sub> and r<sub>2</sub> (r<sub>1</sub> > r<sub>2</sub>). If the potential difference across the source of internal resistance r<sub>1</sub> is zero then the value of R will be

(A) r<sub>1</sub> - r<sub>2</sub>                                      (B)  $\frac{r_1 r_2}{r_1 + r_2}$

(C)  $\frac{r_1 + r_2}{2}$                                       (D) r<sub>2</sub> - r<sub>1</sub>

**Official Ans. by NTA (A)**

**Ans. (A)**



**Sol.**

$$I = \frac{2E}{r_1 + r_2 + R}$$

$$IR = E - Ir_2$$

$$I(R + r_2) = E$$

$$I = \frac{E}{R + r_2}$$

$$\frac{2E}{r_1 + r_2 + R} = \frac{E}{R + r_2}$$

$$2R + 2r_2 = r_1 + r_2 + R$$

$$R = r_1 - r_2$$



12. Two bar magnets oscillate in a horizontal plane in earth's magnetic field with time periods of 3 s and 4 s respectively. If their moments of inertia are in the ratio of 3 : 2 then the ratio of their magnetic moments will be :

- (A) 2 : 1                      (B) 8 : 3  
(C) 1 : 3                      (D) 27 : 16

**Official Ans. by NTA (B)**

**Ans. (B)**

**Sol.**  $T = 2\pi \sqrt{\frac{I}{MB_H}}$

$$\frac{T_1}{T_2} = \frac{2\pi \sqrt{\frac{I_1}{M_1 B_H}}}{2\pi \sqrt{\frac{I_2}{M_2 B_H}}} = \frac{3}{4}$$

$$\sqrt{\frac{I_1}{I_2} \times \frac{M_2}{M_1}} = \frac{3}{4}$$

$$\sqrt{\frac{I_1}{I_2}} \times \sqrt{\frac{M_2}{M_1}} = \frac{3}{4}$$

$$\sqrt{\frac{3}{2}} \times \sqrt{\frac{M_2}{M_1}} = \frac{3}{4}$$

$$\frac{3}{2} \times \frac{M_2}{M_1} = \frac{9}{16}$$

$$\frac{M_1}{M_2} = \frac{8}{3}$$

13. A magnet hung at 45° with magnetic meridian makes an angle of 60° with the horizontal. The actual value of the angle of dip is

- (A)  $\tan^{-1}\left(\sqrt{\frac{3}{2}}\right)$                       (B)  $\tan^{-1}(\sqrt{6})$   
(C)  $\tan^{-1}\left(\sqrt{\frac{2}{3}}\right)$                       (D)  $\tan^{-1}\left(\sqrt{\frac{1}{2}}\right)$

**Official Ans. by NTA (A)**

**Ans. (A)**

**Sol.**  $\tan\theta' = \frac{\tan\theta}{\cos\alpha}$

$$\theta' = 60^\circ$$

$$\alpha = 45^\circ$$

$$\sqrt{3} = \frac{\tan\theta}{\frac{1}{\sqrt{2}}}$$

$$\tan\theta = \sqrt{\frac{3}{2}}$$

$$\theta = \tan^{-1}\sqrt{\frac{3}{2}}$$

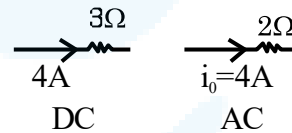
14. A direct current of 4 A and an alternating current of peak value 4 A flow through resistance of 3 Ω and 2 Ω respectively. The ratio of heat produced in the two resistances in same interval of time will be :

- (A) 3 : 2                      (B) 3 : 1  
(C) 3 : 4                      (D) 4 : 3

**Official Ans. by NTA (B)**

**Ans. (B)**

**Sol.**



$$H_1 = i^2 R_1 t \qquad H_2 = i_{\text{rms}}^2 R_2 t \left\{ i_{\text{rms}} = \frac{i_0}{\sqrt{2}} \right\}$$

$$H_1 = 16(3)t \qquad H_2 = \frac{i_0^2}{2} R_2 t$$

$$H_2 = 16t$$

$$H_1 : H_2 = 3 : 1$$

15. A beam of light travelling along X-axis is described by the electric field  $E_y = 900 \sin \omega(t-x/c)$ . The ratio of electric force to magnetic force on a charge q moving along Y-axis with a speed of  $3 \times 10^7 \text{ ms}^{-1}$  will be :

[Given speed of light =  $3 \times 10^8 \text{ ms}^{-1}$ ]

- (A) 1 : 1                      (B) 1 : 10  
(C) 10 : 1                      (D) 1 : 2

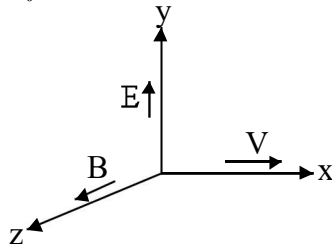
**Official Ans. by NTA (C)**

**Ans. (C)**



Sol.  $E_y = 900 \sin\left(\omega t - \frac{\omega x}{c}\right)$

$E_0 = 900$



$F_E = qE_0$

$F_B = qvB_0$

$\frac{F_E}{F_B} = \frac{E_0}{vB_0} = \frac{c}{v} = \frac{3 \times 10^8}{3 \times 10^7} = 10 : 1$

16. A microscope was initially placed in air (refractive index 1). It is then immersed in oil (refractive index 2). For a light whose wavelength in air is  $\lambda$ , calculate the change of microscope's resolving power due to oil and choose the correct option

(A) Resolving power will be  $\frac{1}{4}$  in the oil than it was in the air

(B) Resolving power will be twice in the oil than it was in the air.

(C) Resolving power will be four times in the oil than it was in the air.

(D) Resolving power will be  $\frac{1}{2}$  in the oil than it was in the air.

**Official Ans. by NTA (C)**

**Ans. (B)**

Sol.  $(R.P)_{air} = \frac{2 \sin \theta}{1.22 \lambda}$

$(R.P)_{oil} = \frac{2 \sin \theta}{1.22 \lambda_{oil}} = \frac{2 \sin \theta \times \mu}{1.22 \lambda}$

$(R.P)_{oil} = (R.P)_{air} \times 2$

17. An electron (mass  $m$ ) with an initial velocity  $\vec{v} = v_0 \hat{i}$  ( $v_0 > 0$ ) is moving in an electric field  $\vec{E} = -E_0 \hat{i}$  ( $E_0 > 0$ ) where  $E_0$  is constant. If at  $t = 0$  de Broglie wavelength is  $\lambda_0 = \frac{h}{mv_0}$ , then its de

Broglie wavelength after time  $t$  is given by

(A)  $\lambda_0$  (B)  $\lambda_0 \left(1 + \frac{eE_0 t}{mv_0}\right)$

(C)  $\lambda_0 t$  (D)  $\frac{\lambda_0}{\left(1 + \frac{eE_0 t}{mv_0}\right)}$

**Official Ans. by NTA (D)**

**Ans. (D)**

Sol.  $\odot \rightarrow V_0$

$E = -E_0 \hat{i}$

$\lambda_0 = \frac{h}{mv_0}$

$v = v_0 + \frac{eE_0 t}{m}$

$\lambda = \frac{h}{mv} = \frac{h}{m\left(v_0 + \frac{eE_0 t}{m}\right)}$

$\lambda' = \frac{h}{mv_0 \left(1 + \frac{eE_0 t}{mv_0}\right)}$

$\lambda' = \frac{\lambda_0}{\left(1 + \frac{eE_0 t}{mv_0}\right)}$

18. What is the half-life period of a radioactive material if its activity drops to  $1/16^{\text{th}}$  of its initial value of 30 years ?

(A) 9.5 years

(B) 8.5 years

(C) 7.5 years

(D) 10.5 years

**Official Ans. by NTA (C)**

**Ans. (C)**

Sol.  $A = A_0 e^{-\lambda t}$

$\Rightarrow -\lambda t = \ln\left(\frac{A}{A_0}\right)$

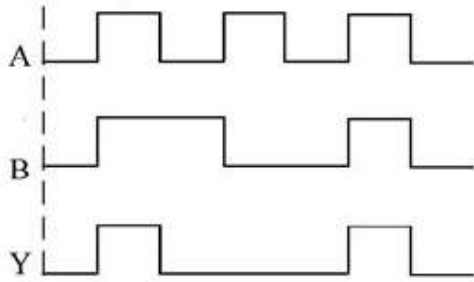
$\Rightarrow -\frac{\ln 2}{t_{1/2}} \times 30 = \ln\left(\frac{1}{16}\right)$

$\Rightarrow -\frac{\ln 2}{t_{1/2}} \times 30 = -4 \ln 2$

$\Rightarrow t_{1/2} = \frac{30}{4} = 7.5 \text{ yrs}$



19. A logic gate circuit has two inputs A and B and output Y. The voltage waveforms of A, B and Y are shown below



The logic gate circuit is

- (A) AND gate                      (B) OR gate  
(C) NOR gate                      (D) NAND gate

**Official Ans. by NTA (A)**

**Ans. (A)**

**Sol.** By making Truth table

A	B	Output
0	0	0
1	1	1
0	1	0
1	0	0

Comparing with output of AND gate

A	B	AND
0	0	0
0	1	0
1	0	0
1	1	1

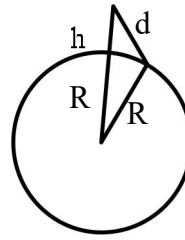
⇒ logic gate present is AND gate

20. At a particular station, the TV transmission tower has a height of 100 m. To triple its coverage range, height of the tower should be increased to

- (A) 200 m                      (B) 300 m  
(C) 600 m                      (D) 900 m

**Official Ans. by NTA (D)**

**Ans. (D)**



**Sol.**

Let d be range

$$d^2 = (h+R)^2 - R^2$$

$$= h^2 + R^2 + 2RH - R^2$$

$$d^2 = h^2 + 2Rh$$

as  $R \gg h$  then

$$d \approx \sqrt{2Rh} \dots (1)$$

Now, if coverage is to be increased 3 times

$$3d = \sqrt{2Rh'} \dots (2)$$

Divide 2 and 1  $\frac{3d}{d} = \sqrt{\frac{2Rh'}{2Rh}}$

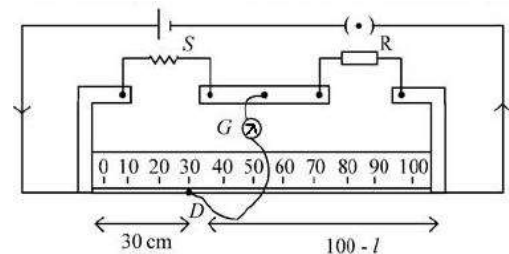
$$9 = \frac{h'}{h}$$

$$9h = h'$$

If  $h = 100$  m then tower of height 900 m is required

**SECTION-B**

1. In meter bridge experiment for measuring unknown resistance 'S', the null point is obtained at a distance 30 cm from the left side as shown at point D. If R is 5.6 kΩ, then the value of unknown resistance 'S' will be \_\_\_\_\_ Ω.



**Official Ans. by NTA (2400)**

**Ans. (2400)**

**Sol.**  $\frac{S}{30} = \frac{5.6 \times 10^3}{70}$

$$S = \frac{3}{7} \times 5.6 \times 10^3 = 2400$$



2. The one division of main scale of vernier callipers reads 1 mm and 10 divisions of Vernier scale is equal to the 9 divisions on main scale. When the two jaws of the instrument touch each other the zero of the Vernier lies to the right of zero of the main scale and its fourth division coincides with a main scale division. When a spherical bob is tightly placed between the two jaws, the zero of the Vernier scale lies in between 4.1 cm and 4.2 cm and 6<sup>th</sup> Vernier division coincides with a main scale division. The diameter of the bob will be \_\_\_\_\_  $10^{-2}$  cm

**Official Ans. by NTA (412)**

**Ans. (412)**

**Sol.** 10 VSD = 9 MSD

1 VST = .9 MSD

L.C. = .1 mm = .01 cm

+ve zero error = .4mm

= 0.04 cm

Negative zero error = 4.1 cm + 6 × .01

= 4.12 cm

= 412 × 10<sup>-2</sup> cm

3. Two beams of light having intensities I and 4I interfere to produce a fringe pattern on a screen. The phase difference between the two beams are  $\pi/2$  and  $\pi/3$  at points A and B respectively. The difference between the resultant intensities at the two points is xI. The value of x will be \_\_\_\_\_ .

**Official Ans. by NTA (2)**

**Ans. (2)**

**Sol.**  $\phi_A = \frac{\pi}{2}$

$\phi_B = \frac{\pi}{3}$

$$I_A = I + 4I + 2\sqrt{I} \sqrt{4I} \cos\left(\frac{\pi}{2}\right)$$

$$= 5I + 4I(0) = 5I$$

$$I_B = I + 4I + 2\sqrt{I} \sqrt{4I} \cos(60^\circ)$$

$$= 5I + 4I \times \frac{1}{2} = 7I$$

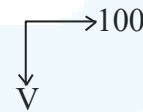
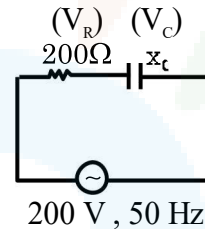
$$I_B - I_A = 7I - 5I = 2I, (x = 2)$$

4. To light, a 50 W, 100 V lamp is connected, in series with a capacitor of capacitance  $\frac{50}{\pi\sqrt{x}} \mu\text{F}$ , with 200 V, 50Hz AC source. The value of x will be \_\_\_\_\_ .

**Official Ans. by NTA (3)**

**Ans. (3)**

**Sol.**  $P = \frac{V^2}{R} \Rightarrow R = \frac{V^2}{P}$



$$R = \frac{100 \times 10^2}{50} = R = 200\Omega$$

$$V_R^2 + V_C^2 = V^2$$

$$(100)^2 + V_C^2 = (200)^2$$

$$i = \frac{100}{200} = \frac{1}{2}; \quad V^2 = 40000$$

$$V = I \times X_C; \quad V_C^2 = 30000$$

$$V_C = 100\sqrt{3}$$

$$X_C = 200\sqrt{3}$$

$$200\sqrt{3} = \frac{1}{\omega C}$$

$$C = \frac{1}{20 \times 50 \times 20\sqrt{3}} = \frac{50 \times 10^{-6}}{\sqrt{x}}$$

$$\sqrt{x} = 50 \times 10^{-6} \times 100 \times 200\sqrt{3}$$

$$X = 3$$

5. A 1 m long copper wire carries a current of 1 A. If the cross section of the wire is  $2.0 \text{ mm}^2$  and the resistivity of copper is  $1.7 \times 10^{-8} \Omega \text{ m}$ . the force experienced by moving electron in the wire is \_\_\_\_\_  $\times 10^{-23} \text{ N}$ . (charge on electron =  $1.6 \times 10^{-19} \text{ C}$ )

**Official Ans. by NTA (136)**

**Ans. (136)**

**Sol.**  $l = 1 \text{ m}$

$$i = 1 \text{ A}$$

$$\text{Area} = 2 \times 10^{-6}$$

$$\rho = 1.7 \times 10^{-8}$$

$$R = \frac{\rho l}{A} = \frac{1.7 \times 10^{-8} \times 1}{2 \times 10^{-5}} = \frac{1.7}{2} \times 10^{-2}$$

$$v = \frac{1.7}{2} \times 10^{-2}$$

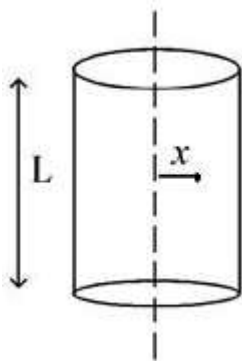
$$F = 1.6 \times 10^{-19} \times \frac{1.7}{2} \times 10^{-2}$$

$$= 1.36 \times 10^{-21}$$

$$= 136 \times 10^{-23}$$

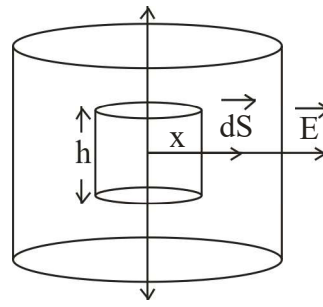
6. A long cylindrical volume contains a uniformly distributed charge of density  $\rho \text{ Cm}^{-3}$ . The electric field inside the cylindrical volume at a distance

$$x = \frac{2\epsilon_0}{\rho} \text{ m from its axis is _____ } \text{Vm}^{-1}$$



**Official Ans. by NTA (1)**

**Ans. (1)**



**Sol.**

$$\int E ds \cos 0 = \frac{q}{\epsilon_0}$$

$$\Rightarrow E \cdot 2\pi x h = \frac{\rho \times \pi x^2 h}{\epsilon_0}$$

$$\Rightarrow E = \frac{\rho x}{2\epsilon_0}$$

$$\Rightarrow E = \frac{\rho}{2\epsilon_0} \times \frac{2\epsilon_0}{\rho} = 1$$

7. A mass 0.9 kg, attached to a horizontal spring, executes SHM with an amplitude  $A_1$ . When this mass passes through its mean position, then a smaller mass of 124 g is placed over it and both masses move together with amplitude  $A_2$ . If the ratio  $\frac{A_1}{A_2}$  is  $\frac{\alpha}{\alpha - 1}$ , then the value of  $\alpha$  will be \_\_\_\_\_.

**Official Ans. by NTA (16)**

**Ans. (16)**

**Sol.**  $\frac{1}{2} k A^2 = \frac{p^2}{2m}$

$$\Rightarrow \left( \frac{A_1}{A_2} \right)^2 = \frac{m_2}{m_1} = \frac{1024}{900}$$

$$\Rightarrow \frac{A_1}{A_2} = \frac{32}{30} = \frac{16}{15} = \frac{16}{16-1}$$

$$\therefore \alpha = 16$$





8. A square aluminium (shear modulus is  $25 \times 10^9 \text{ Nm}^{-2}$ ) slab of side 60 cm and thickness 15 cm is subjected to a shearing force (on its narrow face) of  $18.0 \times 10^4 \text{ N}$ . The lower edge is riveted to the floor. The displacement of the upper edge is \_\_\_\_\_  $\mu \text{ m}$ .

**Official Ans. by NTA (48)**

**Ans. (48)**

**Sol.**  $\frac{F}{A} = \eta \frac{x}{\ell} \Rightarrow \frac{F\ell}{A\eta} = x$

$$\Rightarrow x = \frac{18 \times 10^4 \times 60 \times 10^{-2}}{60 \times 10^{-2} \times 15 \times 10^{-2} \times 25 \times 10^9}$$

$$= 48 \times 10^{-6} \text{ m} = 48 \mu \text{ m}$$

9. A pulley of radius 1.5 m is rotated about its axis by a force  $F = (12t - 3t^2) \text{ N}$  applied tangentially (while  $t$  is measured in seconds). If moment of inertia of the pulley about its axis of rotation is  $4.5 \text{ kg m}^2$ , the number of rotations made by the pulley before its direction of motion is reversed, will be  $\frac{K}{\pi}$ . The value of  $K$  is \_\_\_\_\_.

**Official Ans. by NTA (18)**

**Ans. (18)**

**Sol.**  $\tau = I \alpha \Rightarrow (12t - 3t^2)1.5 = 4.5 \alpha$

$$\Rightarrow \alpha = 4t - t^2$$

$$\Rightarrow \frac{d\omega}{dt} = 4t - t^2 \Rightarrow \omega = \int_0^t (4t - t^2) dt$$

$$\Rightarrow \omega = 2t^2 - \frac{t^3}{3}$$

$$\text{For } \omega = 0 = 2t^2 - \frac{t^3}{3} \Rightarrow t^2 \left( 2 - \frac{t}{3} \right) = 0$$

$$\Rightarrow t = 0, 6.$$

$$\frac{d\theta}{dt} = 2t^2 - \frac{t^3}{3} \Rightarrow \theta = \int_0^6 \left( 2t^2 - \frac{t^3}{3} \right) dt$$

$$= \left[ \frac{2t^3}{3} - \frac{t^4}{12} \right]_0^6$$

$$= 6^3 \left( \frac{2}{3} - \frac{6}{12} \right) = 6^3 \left( \frac{8-6}{12} \right)$$

$$= \frac{6^3}{6} = 36$$

$$\text{No. of revolutions} = \frac{36}{2\pi} = \frac{18}{\pi}$$

$$\therefore K = 18$$

10. A ball of mass  $m$  is thrown vertically upward. Another ball of mass  $2m$  is thrown at an angle  $\theta$  with the vertical. Both the balls stay in air for the same period of time. The ratio of the heights attained by the two balls respectively is  $\frac{1}{x}$ . The value of  $x$  is \_\_\_\_\_.

**Official Ans. by NTA (1)**

**Ans. (1)**

**Sol.** Time of flight is same

$\Rightarrow$  vertical component of velocity is same

$\Rightarrow H_{\text{max}}$  is same