

FINAL JEE-MAIN EXAMINATION - JULY, 2022
Held On Thursday 28 July, 2022
TIME :9:00 AM TO 12:00 NOON

SECTION-A

1. Identify the incorrect statement from the following.
 (A) A circular path around the nucleus in which an electron moves is proposed as Bohr's orbit.
 (B) An orbital is the one electron wave function (Ψ) in an atom.
 (C) The existence of Bohr's orbits is supported by hydrogen spectrum.
 (D) Atomic orbital is characterised by the quantum numbers n and l only

Official Ans. by NTA (D)

Ans. (D)

Sol. Atomic orbital is characterised by n, l, m .

2. Which of the following relation is not correct ?

- (A) $\Delta H = \Delta U - P\Delta V$ (B) $\Delta U = q + W$
 (C) $\Delta S_{\text{sys}} + \Delta S_{\text{surr}} \geq 0$ (D) $\Delta G = \Delta H - T\Delta S$

Official Ans. by NTA (A)

Ans. (A)

Sol. If $U + Pv$ (By definition)

$$\Delta H = \Delta U + P\Delta V$$

$$\Delta H = \Delta U + P\Delta V$$

3. Match List-I with List-II.

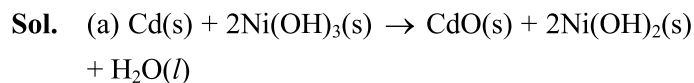
	List-I		List-II
(A)	$\text{Cd(s)} + 2\text{Ni(OH)}_3\text{(s)} \rightarrow \text{CdO(s)} + 2\text{Ni(OH)}_2\text{(s)} + \text{H}_2\text{O(l)}$	(I)	Primary battery
(B)	$\text{Zn(Hg)} + \text{HgO(s)} \rightarrow \text{ZnO(s)} + \text{Hg(l)}$	(II)	Discharging of secondary battery
(C)	$2\text{PbSO}_4\text{(s)} + 2\text{H}_2\text{O(l)} \rightarrow \text{Pb(s)} + \text{PbO}_2\text{(s)} + 2\text{H}_2\text{SO}_4\text{(aq)}$	(III)	Fuel cell
(D)	$2\text{H}_2\text{(g)} + \text{O}_2\text{(g)} \rightarrow 2\text{H}_2\text{O(l)}$	(IV)	Charging of secondary battery

Choose the correct answer from the options given below :

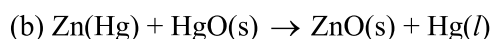
- (A) (A) – (I), (B) – (II), (C) – (III), (D) – (IV)
 (B) (A) – (IV), (B) – (I), (C) – (II), (D) – (III)
 (C) (A) – (II), (B) – (I), (C) – (IV), (D) – (III)
 (D) (A) – (II), (B) – (I), (C) – (III), (D) – (IV)

Official Ans. by NTA (C)

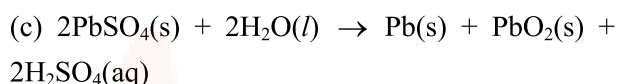
Ans. (C)




Discharge of secondary Battery



(Primary Battery Mercury cell)



Charging of secondary Battery



4. Match List-I with List-II.

	List-I Reaction		List-II Catalyst
(A)	$4\text{NH}_3\text{(g)} + 5\text{O}_2\text{(g)} \rightarrow 4\text{NO(g)} + 6\text{H}_2\text{O(g)}$	(I)	NO(g)
(B)	$\text{N}_2\text{(g)} + 3\text{H}_2\text{(g)} \rightarrow 2\text{NH}_3\text{(g)}$	(II)	H ₂ SO ₄ (l)
(C)	$\text{C}_{12}\text{H}_{22}\text{O}_{11}\text{(aq)} + \text{H}_2\text{O(l)} \rightarrow \text{C}_6\text{H}_{12}\text{O}_6 \text{ (Glucose)} + \text{C}_6\text{H}_{12}\text{O}_6 \text{ (Fructose)}$	(III)	Pt(s)
(D)	$2\text{SO}_2\text{(g)} + \text{O}_2\text{(g)} \rightarrow 2\text{SO}_3\text{(g)}$	(IV)	Fe(s)

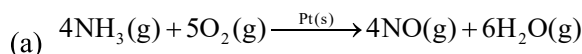
Choose the correct answer from the options given below :

- (A) (A) – (II), (B) – (III), (C) – (I), (D) – (IV)
 (B) (A) – (III), (B) – (II), (C) – (I), (D) – (IV)
 (C) (A) – (III), (B) – (IV), (C) – (II), (D) – (I)
 (D) (A) – (III), (B) – (II), (C) – (IV), (D) – (I)

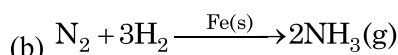
Official Ans. by NTA (C)

Ans. (C)

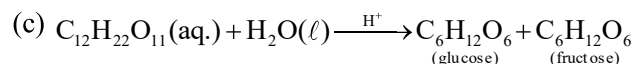
Sol.



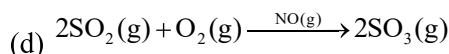
Ostwald process 500 K



Haber's process



Inversion of sugar cane





5. In which of the following pairs, electron gain enthalpies of constituent elements are nearly the same or identical ?

- (A) Rb and Cs (B) Na and K
(C) Ar and Kr (D) I and At

Choose the correct answer from the options given below :

- (A) (A) and (B) only
(B) (B) and (C) only
(C) (A) and (C) only
(D) (C) and (D) only

Official Ans. by NTA (C)

Ans. (C)

Sol. Rb & Cs have nearly same electron gain enthalpy
electron gain enthalpy = - 46 kJ/ml

Ar & Kr have same ΔH_{eq} . Value is + 96 kJ/ml

6. Which of the reaction is suitable for concentrating ore by leaching process ?

- (A) $2Cu_2S + 3O_2 \rightarrow 2Cu_2O + 2SO_2$
(B) $Fe_3O_4 + CO \rightarrow 3FeO + CO_2$
(C) $Al_2O_3 + 2NaOH + 3H_2O \rightarrow 2Na[Al(OH)_4]$
(D) $Al_2O_3 + 6Mg \rightarrow 6MgO + 4Al$

Official Ans. by NTA (C)

Ans. (C)

Sol. $Al_2O_3 + 2NaOH + 3H_2O \rightarrow 2Na, [Al(OH)_4]$

Leaching.

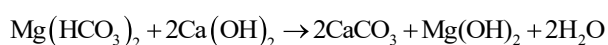
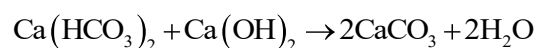
7. The metal salts formed during softening of hardwater using Clark's method are :

- (A) $Ca(OH)_2$ and $Mg(OH)_2$
(B) $CaCO_3$ and $Mg(OH)_2$
(C) $Ca(OH)_2$ and $MgCO_3$
(D) $CaCO_3$ and $MgCO_3$

Official Ans. by NTA (B)

Ans. (B)

Sol. Clark's Method Reaction



8. Which of the following statement is incorrect ?

- (A) Low solubility of LiF in water is due to its small hydration enthalpy.
(B) KO_2 is paramagnetic.
(C) Solution of sodium in liquid ammonia is conducting in nature.
(D) Sodium metal has higher density than potassium metal

Official Ans. by NTA (A)

Ans. (A)

Sol. Low solubility of LiF in water is due to high lattice enthalpy

9. Match List-I with List-II, match the gas evolved during each reaction.

	List-I		List-II
(A)	$(NH_4)_2Cr_2O_7 \xrightarrow{\Delta}$	(I)	H_2
(B)	$KMnO_4 + HCl \rightarrow$	(II)	N_2
(C)	$Al + NaOH + H_2O \rightarrow$	(III)	O_2
(D)	$NaNO_3 \xrightarrow{\Delta}$	(IV)	Cl_2

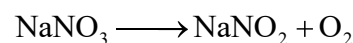
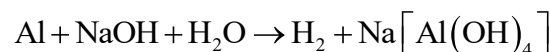
Choose the correct answer from the options given below :

- (A) (A) - (II), (B) - (III), (C) - (I), (D) - (IV)
(B) (A) - (III), (B) - (I), (C) - (IV), (D) - (II)
(C) (A) - (II), (B) - (IV), (C) - (I), (D) - (III)
(D) (A) - (III), (B) - (IV), (C) - (I), (D) - (II)

Official Ans. by NTA (C)

Ans. (C)

Sol. $(NH_4)_2Cr_2O_7 \xrightarrow{\Delta} N_2 + Cr_2O_3 + 4H_2O$



10. Which of the following has least tendency to liberate H_2 from mineral acids ?

- (A) Cu (B) Mn
(C) Ni (D) Zn

Official Ans. by NTA (A)

Ans. (A)

Sol. Copper is least electropositive among the given metals and it lies below H in reactivity series

11. Given below are two statements :

Statement I : In polluted water values of both dissolved oxygen and BOD are very low.

Statement II : Eutrophication results in decrease in the amount of dissolved oxygen.

In the light of the above statements, choose the most appropriate answer from the options given below :

- (A) Both Statement I and Statement II are true
- (B) Both Statement I and Statement II are false
- (C) Statement I is true but Statement II is false
- (D) Statement I is false but Statement II is true

Official Ans. by NTA (D)

Ans. (D)

Sol. Since eutrophication is result of excessive growth of weed in water bodies, which consume dissolved oxygen of water bodies.

∴ Eutrophication decreases amount of dissolved oxygen in water bodies.

Polluted water has low value of dissolved oxygen, but high value of BOD (Biological oxygen demand), since chemical and organic matter requires dissolved oxygen to get decompose.

12. Match List-I with List-II.

	List-I		List-II
(A)		(I)	Spiro compound
(B)		(II)	Aromatic compound
(C)		(III)	Non-planar Heterocyclic compound
(D)		(IV)	Bicyclo compound

Choose the correct answer from the options given below :

- (A) (A) – (II), (B) – (I), (C) – (IV), (D) – (III)
- (B) (A) – (IV), (B) – (III), (C) – (I), (D) – (II)
- (C) (A) – (III), (B) – (IV), (C) – (I), (D) – (II)
- (D) (A) – (IV), (B) – (III), (C) – (II), (D) – (I)

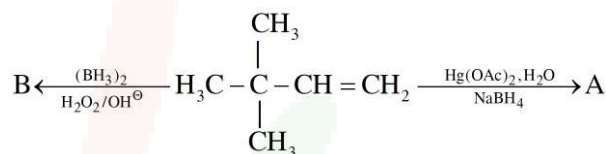
Official Ans. by NTA (C)

Ans. (C)

Sol.

- : Non-planar heterocyclic Compound
- : Bicyclo Compound
- : Spiro Compound
- : Aromatic Compound

13. Choose the correct option for the following reactions.

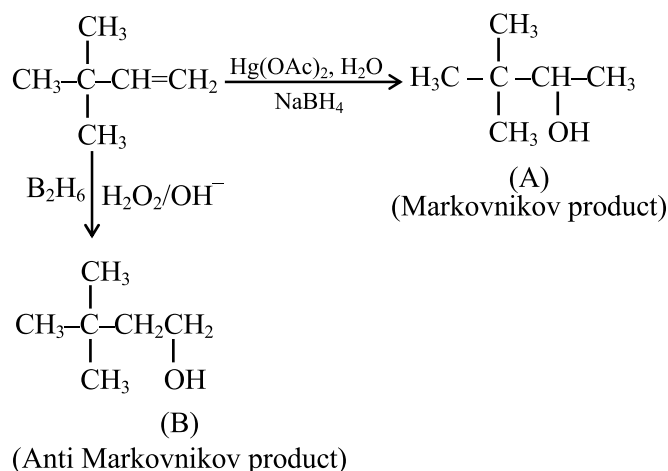


- (A) 'A' and 'B' are both Markovnikov addition products.
- (B) 'A' is Markovnikov product and 'B' is anti-Markovnikov product.
- (C) 'A' and 'B' are both anti-Markovnikov products.
- (D) 'B' is Markovnikov and 'A' is anti-Markovnikov product.

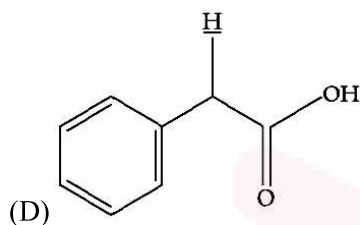
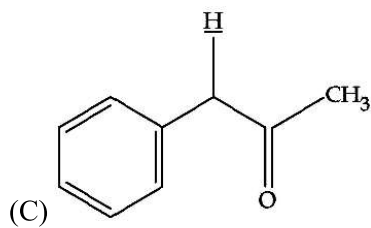
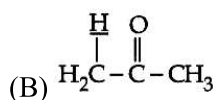
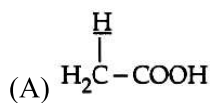
Official Ans. by NTA (B)

Ans. (B)

Sol.



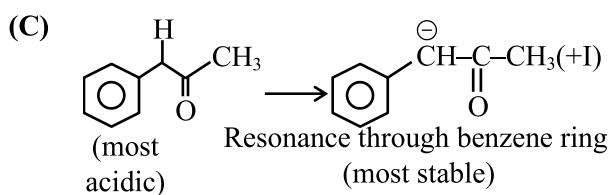
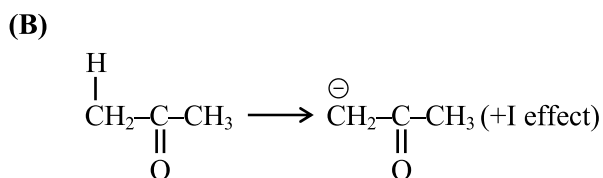
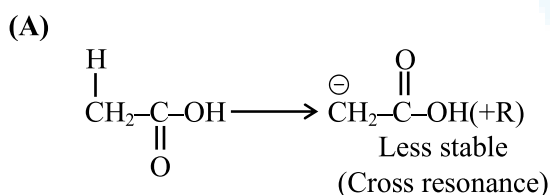
14. Among the following marked proton of which compound shows lowest pK_a value ?



Official Ans. by NTA (C)

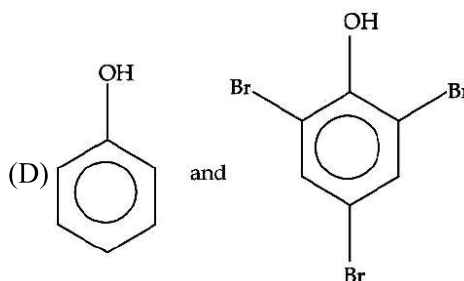
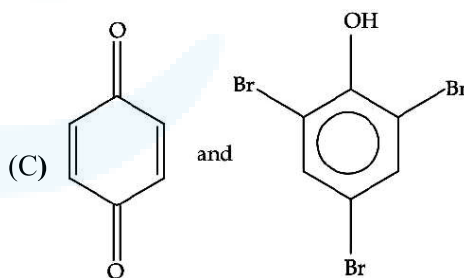
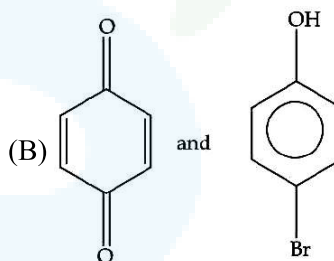
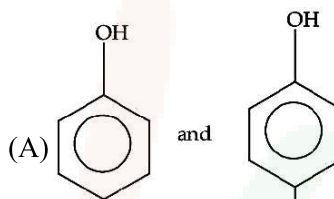
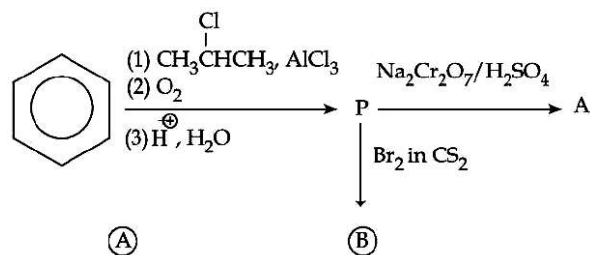
Ans. (C)

Sol.



So it has least pK_a value.

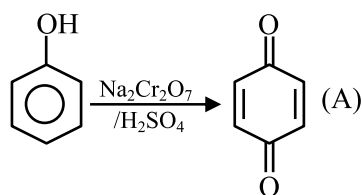
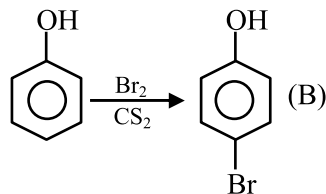
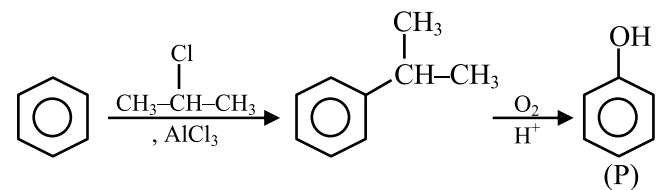
15. Identify the major product A and B for the below given reaction sequence.



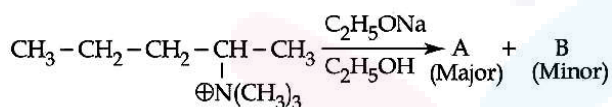
Official Ans. by NTA (B)

Ans. (B)

Sol.



16. Identify the correct statement for the below given transformation.



(A) A - $\text{CH}_3\text{CH}_2\text{CH}=\text{CH}-\text{CH}_3$,
B - $\text{CH}_3\text{CH}_2\text{CH}_2\text{CH}=\text{CH}_2$,
Saytzeff products

(B) A - $\text{CH}_3\text{CH}_2\text{CH}=\text{CH}-\text{CH}_3$,
B - $\text{CH}_3\text{CH}_2\text{CH}_2\text{CH}=\text{CH}_2$,
Hafmann products

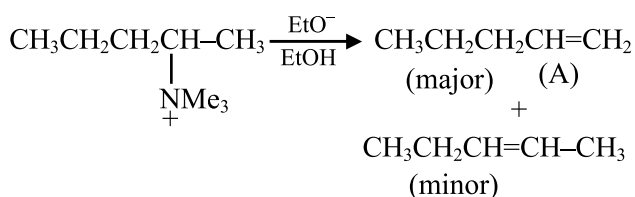
(C) A - $\text{CH}_3\text{CH}_2\text{CH}_2\text{CH}=\text{CH}_2$,
B - $\text{CH}_3\text{CH}_2\text{CH}=\text{CHCH}_3$,
Hofmann products

(D) A - $\text{CH}_3\text{CH}_2\text{CH}_2\text{CH}=\text{CH}_2$,
B - $\text{CH}_3\text{CH}_2\text{CH}=\text{CHCH}_3$,
Saytzeff products

Official Ans. by NTA (C)

Ans. (C)

Sol.

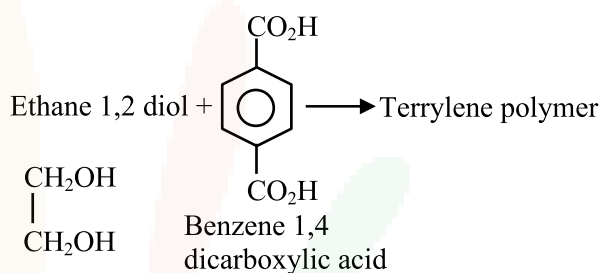


17. Terylene polymer is obtained by condensation of :
(A) Ethane-1, 2-diol and Benzene-1, 3 dicarboxylic acid
(B) Propane-1, 2-diol and Benzene-1, 4 dicarboxylic acid
(C) Ethane-1, 2-diol and Benzene-1, 4 dicarboxylic acid
(D) Ethane-1, 2-diol and Benzene-1, 2 dicarboxylic acid

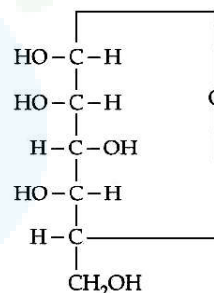
Official Ans. by NTA (C)

Ans. (C)

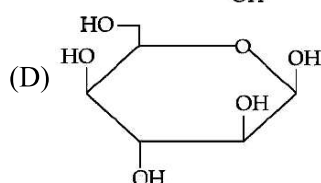
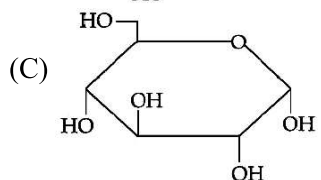
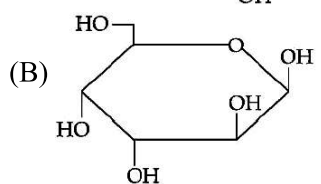
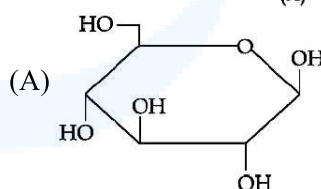
Sol.



18. For the below given cyclic hemiacetal (X), the correct pyranose structure is :



(X)

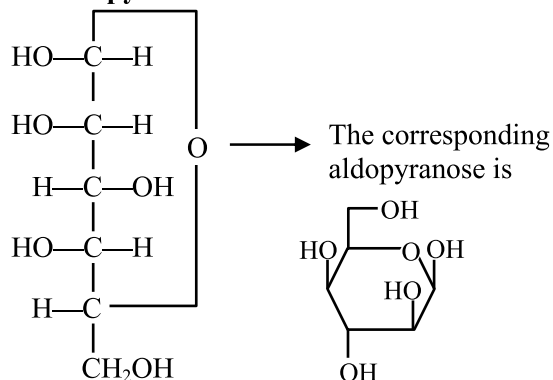


Official Ans. by NTA (D)

Ans. (D)



Sol. Correct pyranose structure is



X(Hemiacetal)

19. Statements about Enzyme Inhibitor Drugs are given below :

- (A) There are Competitive and Non-competitive inhibitor drugs.
- (B) These can bind at the active sites and allosteric sites.
- (C) Competitive Drugs are allosteric site blocking drugs.
- (D) Non-competitive Drugs are active site blocking drugs.

Choose the correct answer from the options given below :

- (A) (A), (D) only
- (B) (A), (C) only
- (C) (A), (B) only
- (D) (A), (B), (C) only

Official Ans. by NTA (C)

Ans. (C)

Sol. Enzyme inhibitors can be competitive inhibitors (inhibit the attachment of substrate on active site of enzyme) and non-competitive inhibitor (changes the active site of enzyme after binding at allosteric site.)

20. For kinetic study of the reaction of iodide ion with H_2O_2 at room temperature :

- (A) Always use freshly prepared starch solution.
- (B) Always keep the concentration of sodium thiosulphate solution less than that of KI solution.
- (C) Record the time immediately after the appearance of blue colour.
- (D) Record the time immediately before the appearance of blue colour.
- (E) Always keep the concentration of sodium thiosulphate solution more than that of KI solution.

Choose the correct answer from the options given below :

- (A) (A), (B), (C) only
- (B) (A), (D), (E) only
- (C) (D), (E) only
- (D) (A), (B), (E) only

Official Ans. by NTA (A)

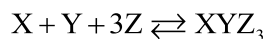
Ans. (A)

Sol. The is recorded immediately after the blue colour appears.

$\text{Na}_2\text{S}_2\text{O}_3$ is kept in limited amount.

SECTION-B

1. In the given reaction,

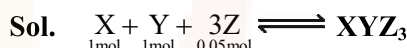


if one mole of each of X and Y with 0.05 mol of Z gives compound XYZ_3 . (Given : Atomic masses of X, Y and Z are 10, 20 and 30 amu, respectively). The yield of XYZ_3 is _____ g.

(Nearest integer)

Official Ans. by NTA (2)

Ans. (2)



1mol 1mol 0.05mol

Z is L.R.

$$\frac{0.05}{3} = 1 \text{ mole of } XYZ_3$$

$$\begin{aligned} \text{Mass of } XYZ_3 &= \frac{0.05}{3} \times (10 + 20 + 30 \times 3) \\ &= 2\text{g} \end{aligned}$$

2. An element M crystallises in a body centred cubic unit cell with a cell edge of 300 pm. The density of the element is 6.0 g cm^{-3} . The number of atoms present in 180 g of the element is _____ $\times 10^{23}$.

(Nearest integer)

Official Ans. by NTA (22)

Ans. (22)

Sol. M is body centred cubic , $\therefore Z = 2$

Let mass of 1 atom of M is A

Edge length = 300 pm

Density = 6g/cm^3

$$\therefore 6\text{g/cm}^3 = \frac{Z \times A}{(300 \times 10^{-10})^3} = \frac{2 \times A}{27 \times 10^{-24}}$$

$$A = 81 \times 10^{-24} \text{g}$$

$$\therefore \text{Atomic mass} = 48.6\text{g}$$

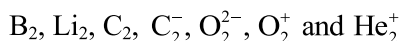
$$\therefore \text{Mole in } 180\text{g} = \frac{180}{48.6} = 3.7 \text{ moles}$$

$$\text{Atoms of M} = 3.7 \times 6 \times 10^{23}$$

$$= 22.22 \times 10^{23} \text{ atoms}$$



3. The number of paramagnetic species among the following is _____.



Official Ans. by NTA (4)

Ans. (4)

Sol. Paramagnetic $B_2, C_2^-, O_2^+, He_2^+$

4. 150 g of acetic acid was contaminated with 10.2 g ascorbic acid ($C_6H_8O_6$) to lower down its freezing point by $(x \times 10^{-1})^\circ C$. The value of x is _____.

(Nearest integer) [Given $K_f = 3.9 \text{ K kg mol}^{-1}$;

Molar mass of ascorbic acid = 176 g mol^{-1}]

Official Ans. by NTA (15)

Ans. (15)

Sol. 150g CH_3COOH

10.2g ascorbic acid \Rightarrow 0.058 moles

$$\Delta T_f = (x \times 10^{-1})^\circ C$$

$$\Delta T_f = k_f \cdot \text{molality}$$

$$= 3.9 \times \frac{0.058}{150} \times 1000$$

$$= 1.5^\circ C$$

$$= 15 \times 10^{-1}^\circ C$$

5. K_a for butyric acid (C_3H_7COOH) is 2×10^{-5} . The pH of 0.2 M solution of butyric acid is $___ \times 10^{-1}$.

(Nearest integer) [Given $\log 2 = 0.30$]

Official Ans. by NTA (27)

Ans. (27)

Sol. K_a of Butyric acid $\Rightarrow 2 \times 10^{-5}$ $pK_a = 4.7$

pH of 0.2 M solution

$$pH = \frac{1}{2} pK_a - \frac{1}{2} \log C$$

$$= \frac{1}{2} (4.7) - \frac{1}{2} \log (0.2)$$

$$= 2.35 + 0.35 = 2.7$$

$$pH = 27 \times 10^{-1}$$

6. For the given first order reaction



the half life of the reaction is 0.3010 min. The ratio of the initial concentration of reactant to the concentration of reactant at time 2.0 min will be equal to _____. (Nearest integer)

Official Ans. by NTA (100)

Ans. (100)

Sol. $A \rightarrow B$ $t_{1/2} = 0.3010 \text{ min}$

$$A_0/A_t \text{ at time 2 min} = ?$$

$$K = \frac{2.303}{t} \log \left[\frac{A_0}{A_t} \right]$$

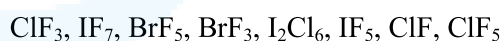
$$\Rightarrow \frac{0.693}{t_{1/2}} = \frac{2.303}{2} \log \left(\frac{A_0}{A_t} \right)$$

$$\text{Or } \frac{2.303 \times 0.3010}{0.3010} = \frac{2.303}{2} \log \frac{A_0}{A_t}$$

$$\log \frac{A_0}{A_t} = 2$$

$$\therefore \frac{A_0}{A_t} = 10^2 = 100$$

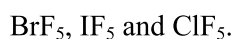
7. The number of interhalogens from the following having square pyramidal structure is :



Official Ans. by NTA (3)

Ans. (3)

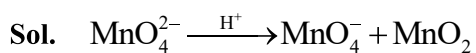
Sol. Square pyramidal structures are



8. The disproportionation of MnO_4^{2-} in acidic medium resulted in the formation of two manganese compounds A and B. If the oxidation state of Mn in B is smaller than that of A, then the spin-only magnetic moment (μ) value of B in BM is _____. (Nearest integer)

Official Ans. by NTA (4)

Ans. (4)



No. of unpaired $\bar{e} = 3$

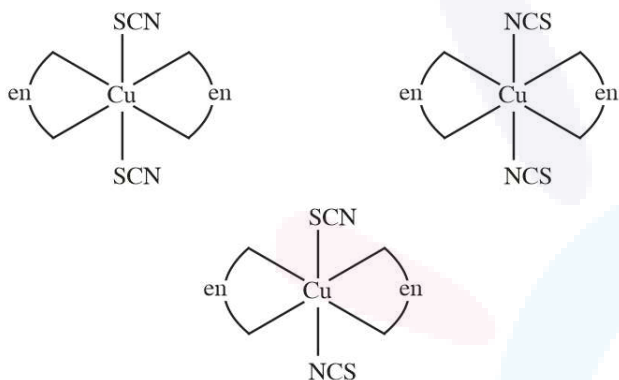
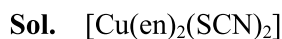
$$\therefore \mu = \sqrt{15} = 3.877$$

Nearest Integer = 4

9. Total number of relatively more stable isomer(s) possible for octahedral complex $[\text{Cu}(\text{en})_2(\text{SCN})_2]$ will be _____.

Official Ans. by NTA (3)

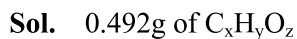
Ans. (3)



10. On complete combustion of 0.492 g of an organic compound containing C, H and O, 0.7938 g of CO_2 and 0.4428 g of H_2O was produced. The % composition of oxygen in the compound is _____.

Official Ans. by NTA (46)

Ans. (46)



Gives 0.7938 g $\text{CO}_2 = 0.018$ moles

0.4428g $\text{H}_2\text{O} = 0.0246$ moles

So moles of C = 0.018 \Rightarrow 0.216 g

Moles of H = 0.049 \Rightarrow 0.049g

\therefore wt. of Oxygen = 0.492 – 0.216 – 0.049

= 0.227g

$$\% \text{ of Oxygen} = \frac{0.227}{0.492} \times 100 = 46 \text{ (approx.)}$$